
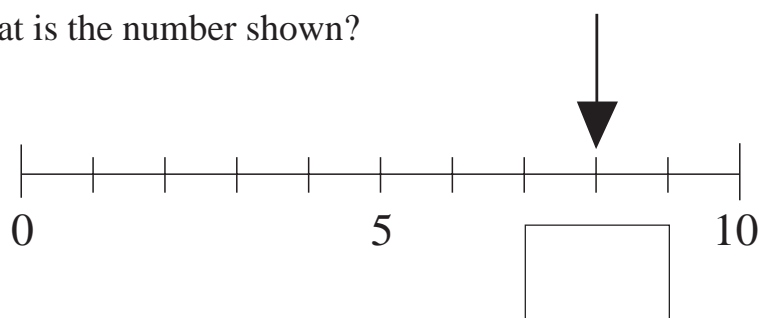


TEST 1

1. Complete the picture so that it has 7 DOTS.



2. What is the number shown?



3. Fill in the missing numbers.

(a) $2 + 3 = \square$

(b) $4 - 1 = \square$

(c) $3 + 4 = \square$

(d) $4 + \square = 9$

(e) $8 - \square = 3$

(f) $\square + 7 = 7$

4. (a) Write these numbers in order of increasing size.

12, 7, 15, 4, 1, 10, 18

.....

- (b) Circle all the **odd** numbers.

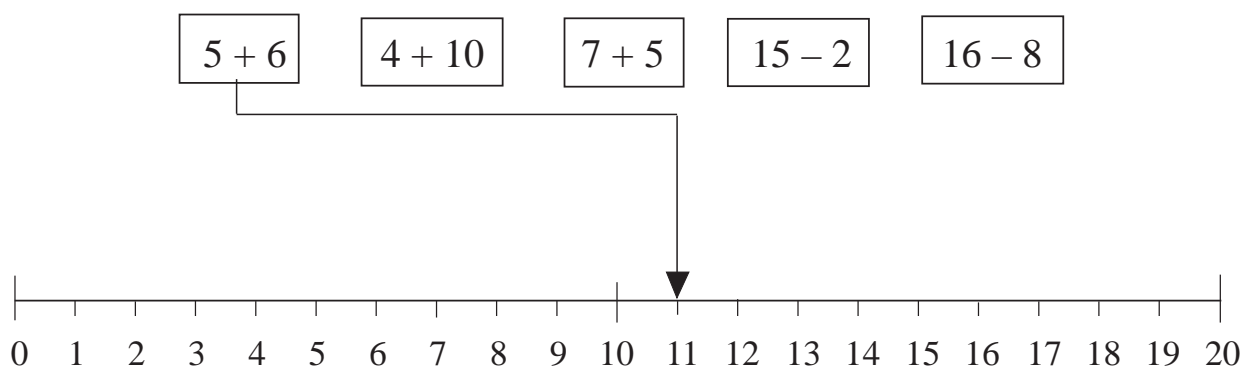
Test 1

5.



- (a) Write the letter **A** on the third shape from the left.
- (b) Write the letter **B** on the fourth shape from the right.
- (c) Write the letter **T** on any triangle.

6. Show with an arrow the answer to each sum. The first one has been done.



7. What is the next number?

(a) 3, 6, 9, 12,

(b) 20, 18, 16, 14,

(c) 2, 6, 10, 14,