

<i>a</i>	12	22	32	42	52			82	92
<i>b</i>	1	2	3			6	7	8	9
<i>c</i>	13	24		46	57	68	79		

*a* =

*b* =

*c* =

a)

31  3422  2664  67

b)

42  4533  3755  59

c)

53  5644  4871  80



	20	50	30	31	32	33	61	62	63	91	92	93	100
+7													

LP 42/2

	30	10	40	90	50	49	48	47	46	80	79	77	76	100
-6														

LP 42/2

a)

$$55 - \square = 50$$

$$43 - \square = 40$$

$$\square \square - 7 = 90$$

$$\square \square - 2 = 50$$

b)


$$10 + 50 + \square = 68$$

$$\square \square + 30 + 2 = 72$$

$$20 + \square \square + 4 = 84$$

$$\square \square + 20 + 6 = 86$$


a)



--	--	--	--	--	--	--

--	--	--	--	--	--	--


b)



--	--	--	--	--	--	--

--	--	--	--	--	--	--

c)


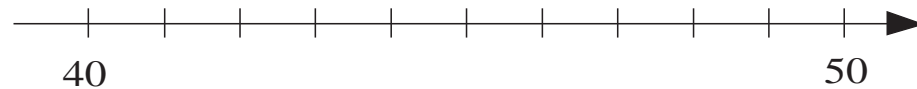
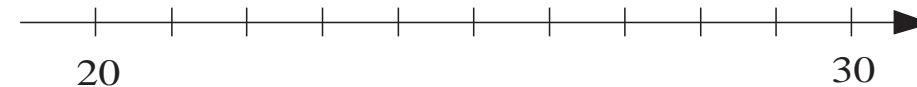
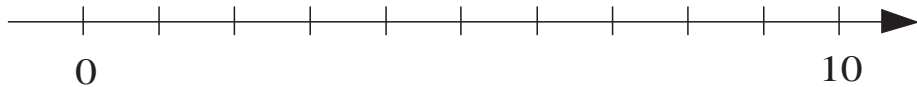


--	--	--	--	--	--	--

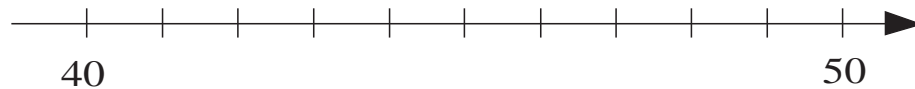
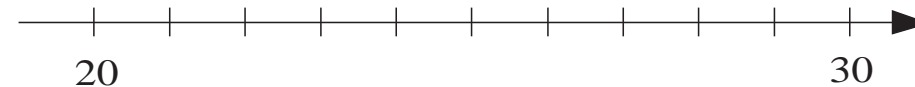
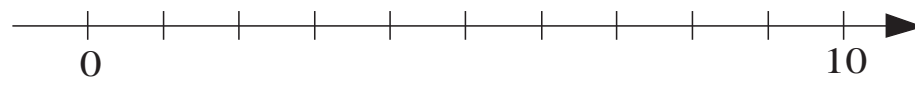
--	--	--	--	--	--	--

	Had	Was given	Now have	
a)	① ① ①	① ①	⑩ ① ① ① ① ① ⑩ ① ① ① ①	<input type="text"/> <input type="text"/> <input type="text"/> <input type="text"/> <input type="text"/> <input type="text"/> <input type="text"/> <input type="text"/>
b)	⑩ ① ① ①	① ①	⑩ ① ① ① ① ① ⑩ ① ① ① ①	<input type="text"/> <input type="text"/> <input type="text"/> <input type="text"/> <input type="text"/> <input type="text"/> <input type="text"/> <input type="text"/>
c)	⑩ ① ① ⑩ ①	① ①	⑩ ① ① ① ① ① ⑩ ① ① ① ①	<input type="text"/> <input type="text"/> <input type="text"/> <input type="text"/> <input type="text"/> <input type="text"/> <input type="text"/> <input type="text"/>
d)	① ① ①	⑩ ① ①	⑩ ① ① ① ① ① ⑩ ① ① ① ①	<input type="text"/> <input type="text"/> <input type="text"/> <input type="text"/> <input type="text"/> <input type="text"/> <input type="text"/> <input type="text"/>
e)	① ① ①	⑩ ① ⑩ ①	⑩ ① ① ① ① ① ⑩ ① ① ① ①	<input type="text"/> <input type="text"/> <input type="text"/> <input type="text"/> <input type="text"/> <input type="text"/> <input type="text"/> <input type="text"/>
f)	⑩ ① ① ①	⑩ ① ①	⑩ ① ① ① ① ① ⑩ ① ① ① ①	<input type="text"/> <input type="text"/> <input type="text"/> <input type="text"/> <input type="text"/> <input type="text"/> <input type="text"/> <input type="text"/>

a)



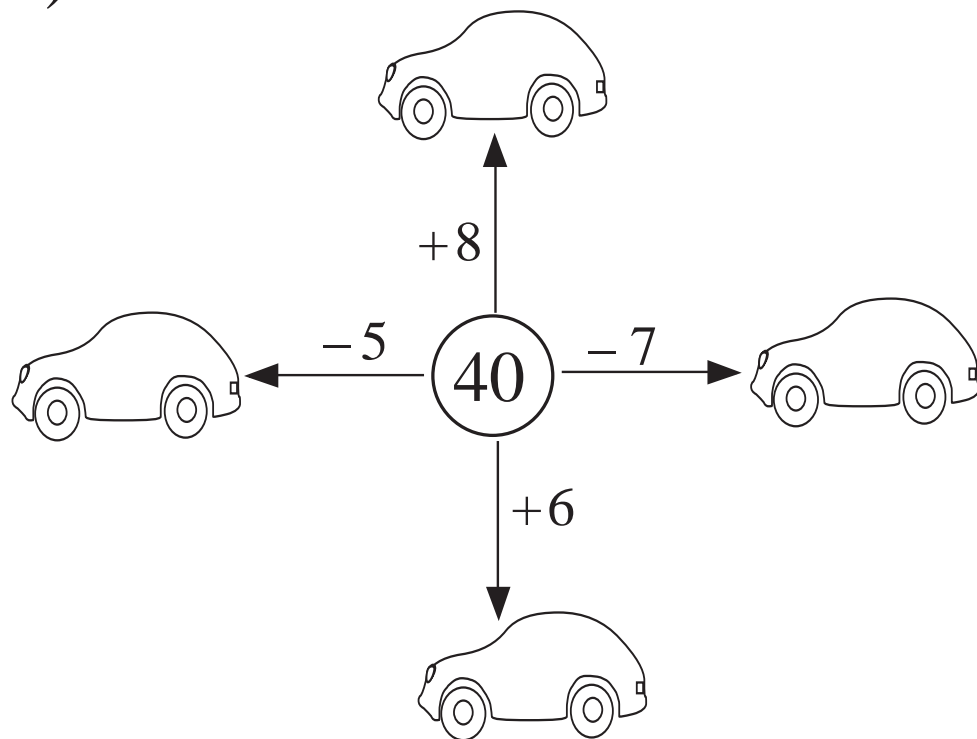
b)



	Had	Spent	Have left	
a)				<input type="text"/> <input type="text"/> <input type="text"/> <input type="text"/> <input type="text"/> <input type="text"/> <input type="text"/> <input type="text"/>
b)				<input type="text"/> <input type="text"/> <input type="text"/> <input type="text"/> <input type="text"/> <input type="text"/> <input type="text"/> <input type="text"/>
c)				<input type="text"/> <input type="text"/> <input type="text"/> <input type="text"/> <input type="text"/> <input type="text"/> <input type="text"/> <input type="text"/>
d)				<input type="text"/> <input type="text"/> <input type="text"/> <input type="text"/> <input type="text"/> <input type="text"/> <input type="text"/> <input type="text"/>
e)				<input type="text"/> <input type="text"/> <input type="text"/> <input type="text"/> <input type="text"/> <input type="text"/> <input type="text"/> <input type="text"/>
f)				<input type="text"/> <input type="text"/> <input type="text"/> <input type="text"/> <input type="text"/> <input type="text"/> <input type="text"/> <input type="text"/>

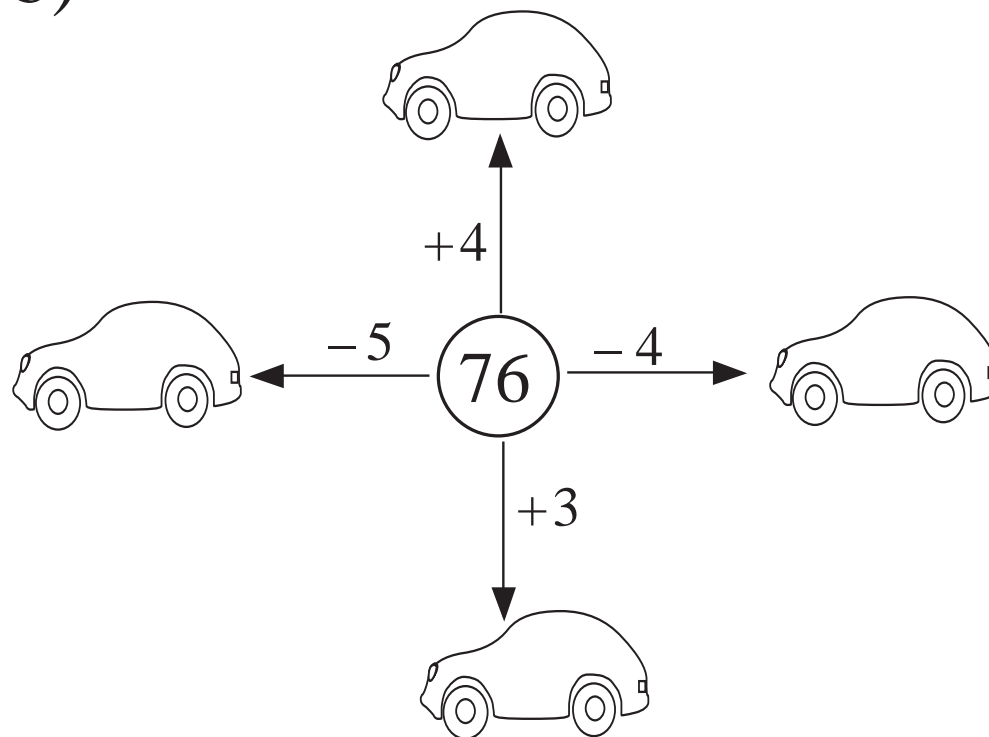


a)

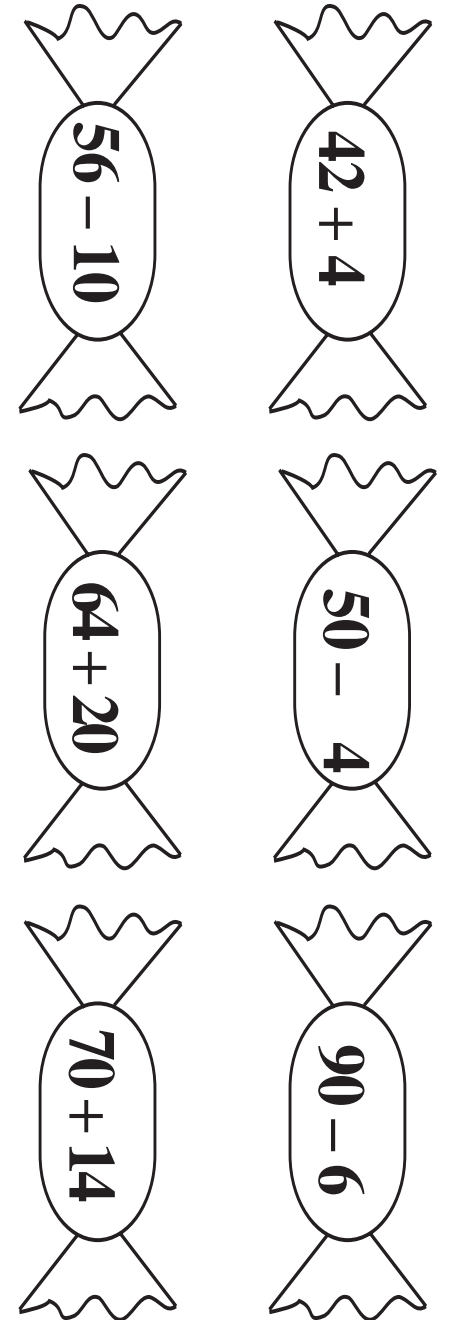
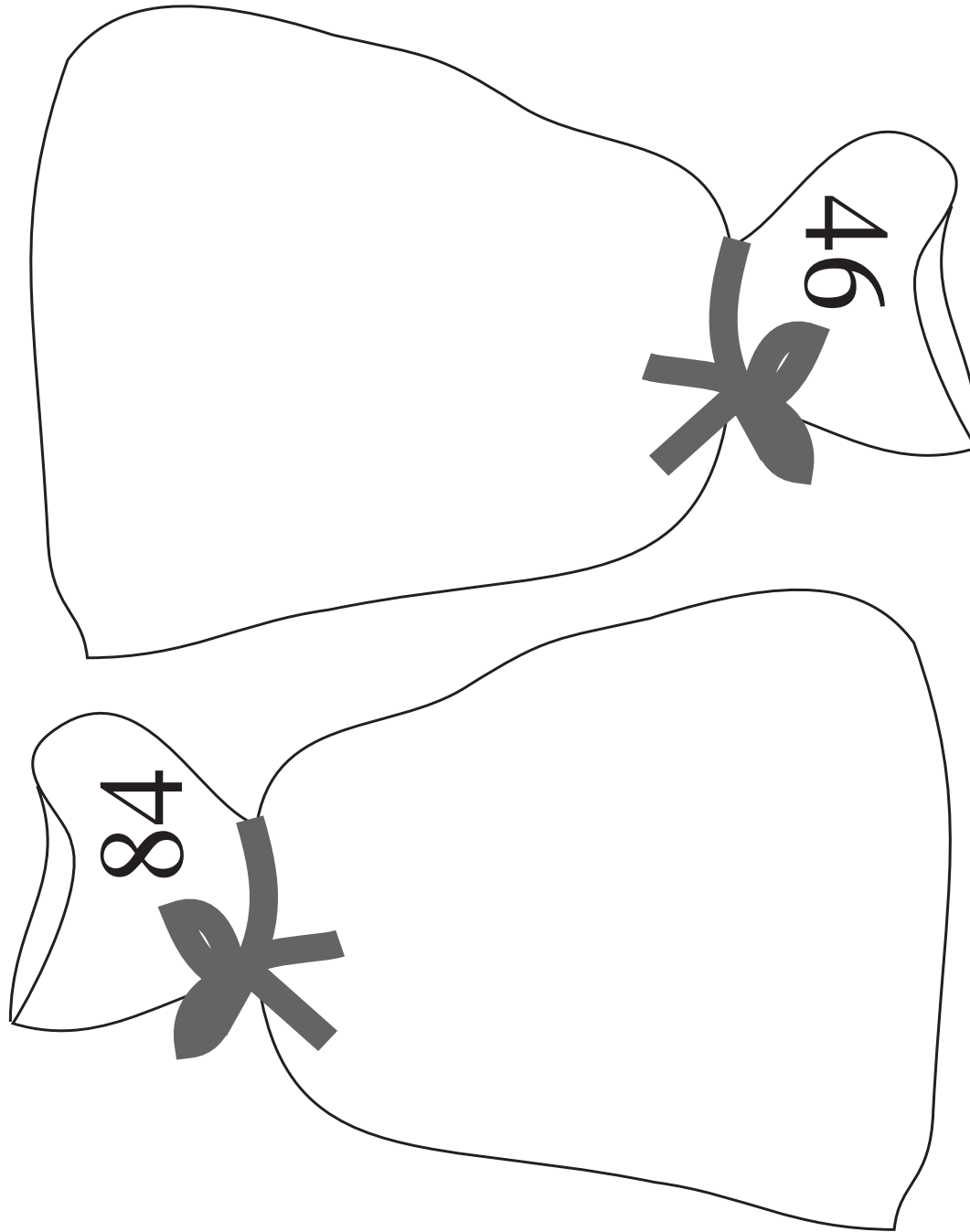



40 =

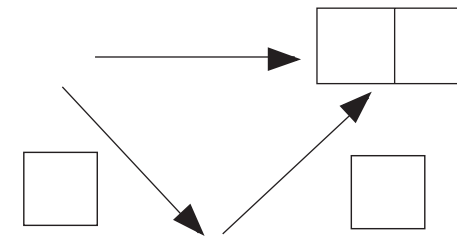
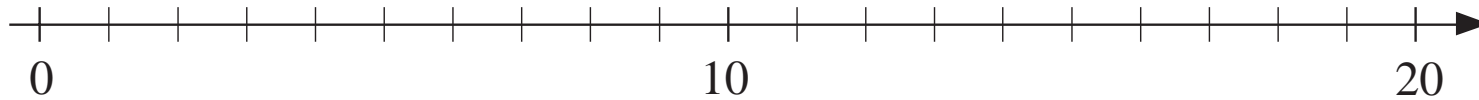
b)



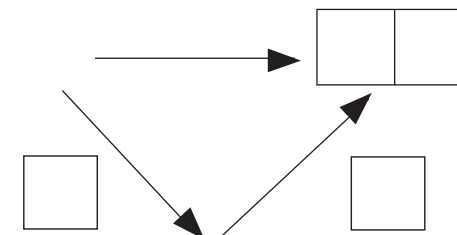
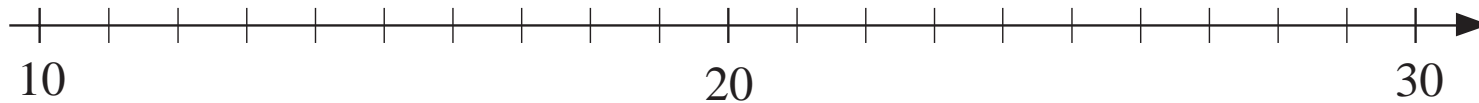
76 =



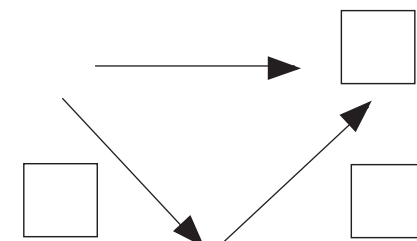
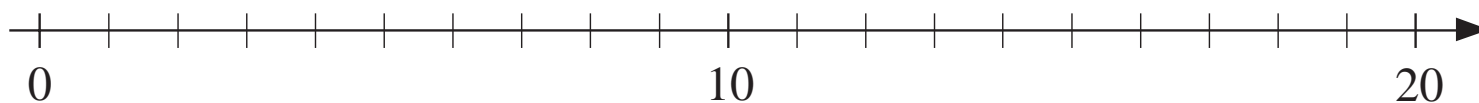
a)



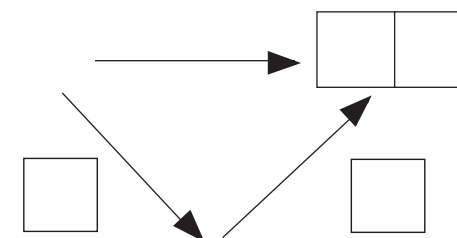
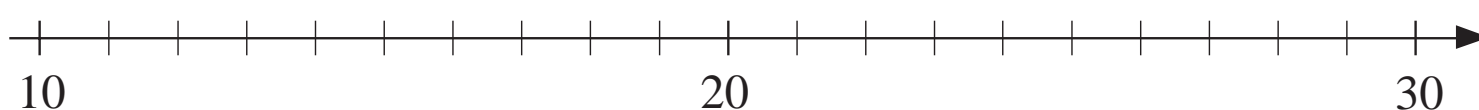
b)



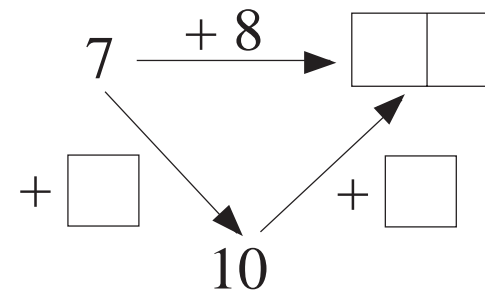
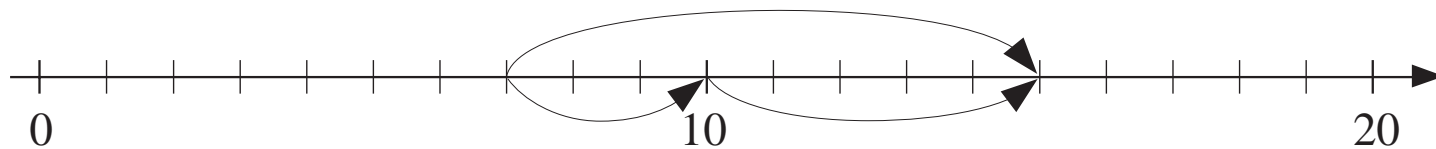
c)



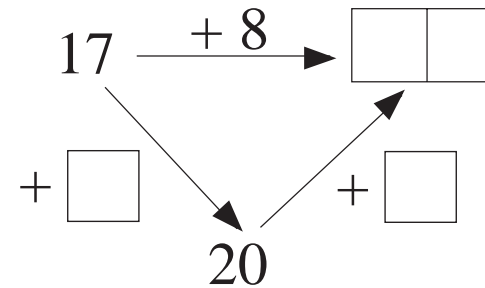
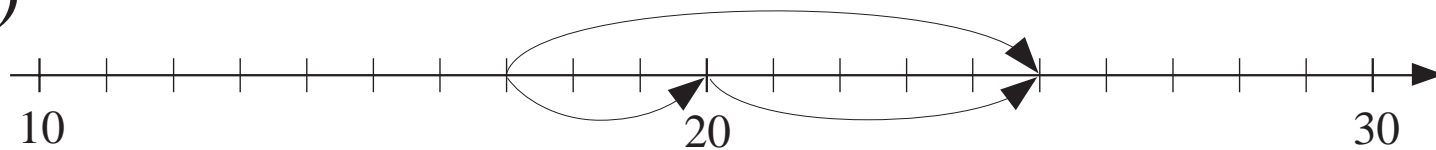
d)



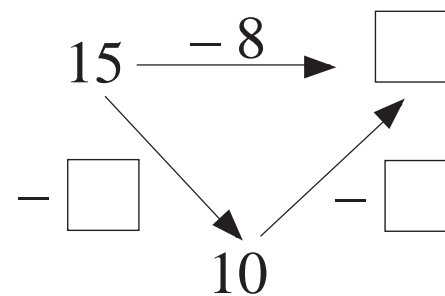
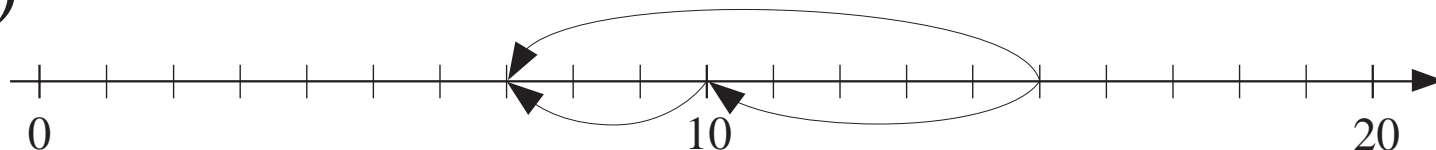
a)



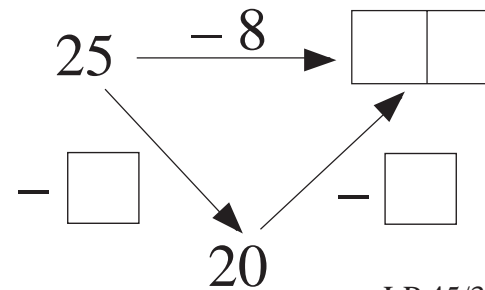
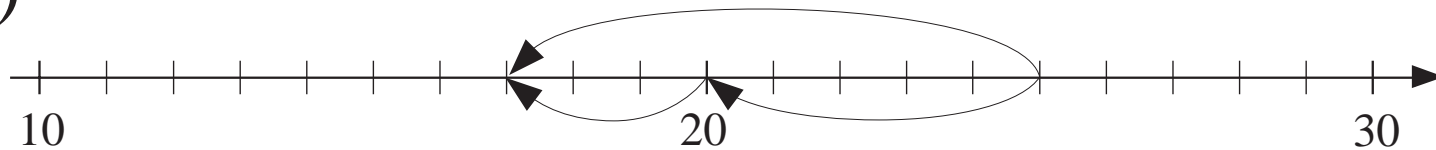
b)



c)



d)



+	17	27	37	47	57	67	77	87	97
5	3	20	30						
	2	22							

LP 46/2

a)

$$6 + 7 = \boxed{\phantom{00}} \boxed{\phantom{00}}$$

$$6 + \boxed{\phantom{00}} + \boxed{\phantom{00}}$$

b)

$$16 + 7 = \boxed{\phantom{00}} \boxed{\phantom{00}}$$

$$16 + \boxed{\phantom{00}} + \boxed{\phantom{00}}$$

c)

$$56 + 7 = \boxed{\phantom{00}} \boxed{\phantom{00}}$$

$$56 + \boxed{\phantom{00}} + \boxed{\phantom{00}}$$

d)

$$15 - 8 = \boxed{\phantom{00}} \boxed{\phantom{00}}$$

$$15 - \boxed{\phantom{00}} - \boxed{\phantom{00}}$$

e)

$$65 - 8 = \boxed{\phantom{00}} \boxed{\phantom{00}}$$

$$65 - \boxed{\phantom{00}} - \boxed{\phantom{00}}$$


f)

$$95 - 8 = \boxed{\phantom{00}} \boxed{\phantom{00}}$$

$$95 - \boxed{\phantom{00}} - \boxed{\phantom{00}}$$

LP 46/7

a)




$$47 + 6 = \square\square$$

$$47 + \square + \square$$

$$\square\square - 6 = 47$$

$$\square\square - \square - \square$$

b)




$$\square\square + \square = \square\square$$

$$\square\square + \square + \square$$

$$\square\square - \square = \square\square$$

$$\square\square - \square - \square$$

c)

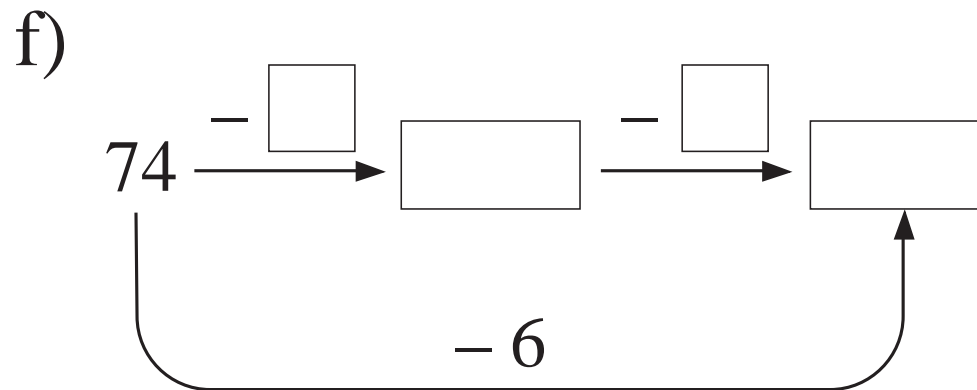
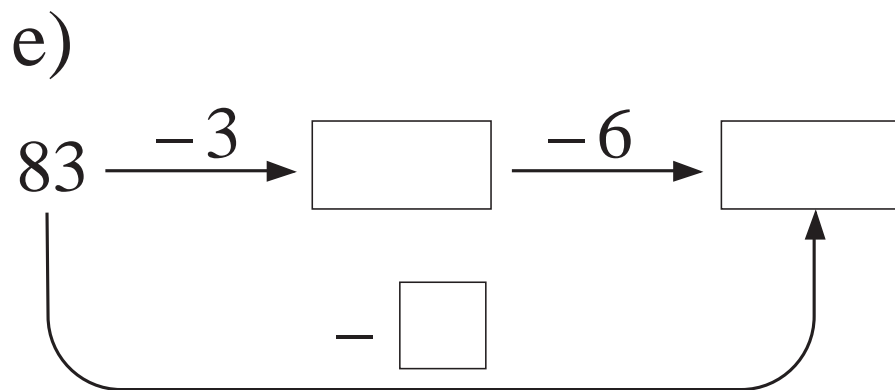
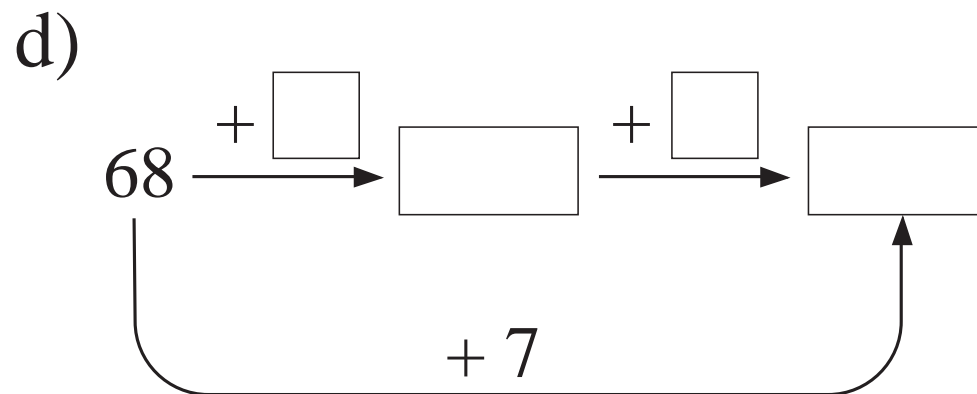
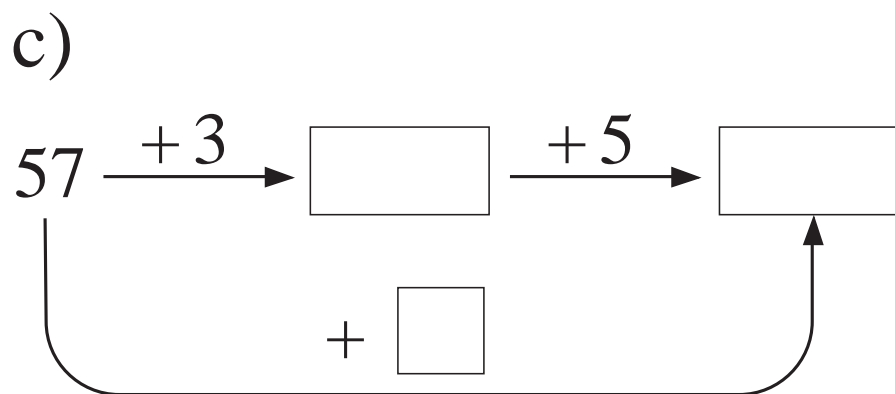
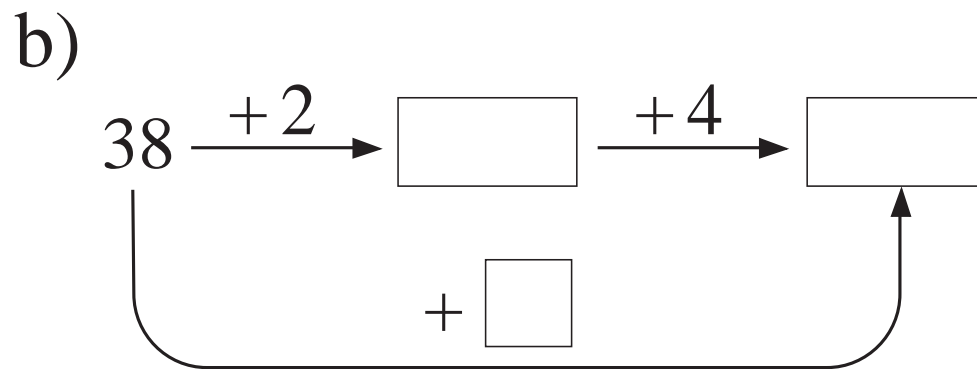
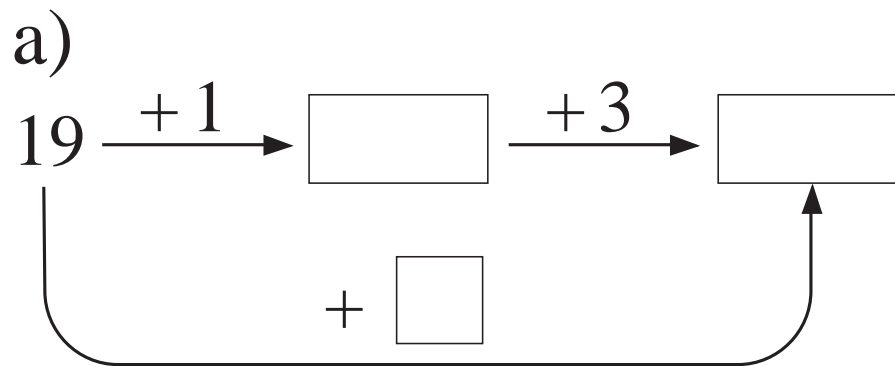


$$\square\square + \square = \square\square$$

$$\square\square + \square + \square$$

$$\square\square - \square = \square\square$$

$$\square\square - \square - \square$$





<b>+</b>	<b>0</b>	<b>1</b>	<b>2</b>	<b>3</b>	<b>4</b>	<b>5</b>	<b>6</b>	<b>7</b>	<b>8</b>	<b>9</b>	<b>10</b>	<b>11</b>	<b>12</b>	<b>13</b>	<b>14</b>	<b>15</b>	<b>16</b>	<b>17</b>	<b>18</b>	<b>19</b>	<b>20</b>	
<b>0</b>	0	1			4				8		10		12	13								
<b>1</b>		2		4		6		8		10			13		15						20	
<b>2</b>	2					7				11	12						18	19	20	21		
<b>3</b>			5			8									17							
<b>4</b>							10					15				19						24
<b>5</b>			7																			
<b>6</b>				9	10									19								
<b>7</b>			9								17											
<b>8</b>					12				16													
<b>9</b>							15			18		20										
<b>10</b>				13												25				28		30



a)  $8 \xrightarrow{+3} \boxed{\phantom{00}}$   
 $+ \boxed{\phantom{00}} \searrow \swarrow$   
 $10$

b)  $5 \xrightarrow{+9} \boxed{\phantom{00}}$   
 $+ \boxed{\phantom{00}} \searrow \swarrow$   
 $10$

c)  $7 \xrightarrow{+4} \boxed{\phantom{00}}$   
 $+ \boxed{\phantom{00}} \searrow \swarrow$   
 $10$

d)  $18 \xrightarrow{+3} \boxed{\phantom{00}}$   
 $+ \boxed{\phantom{00}} \searrow \swarrow$   
 $20$

e)  $15 \xrightarrow{+9} \boxed{\phantom{00}}$   
 $+ \boxed{\phantom{00}} \searrow \swarrow$   
 $20$

f)  $17 \xrightarrow{+4} \boxed{\phantom{00}}$   
 $+ \boxed{\phantom{00}} \searrow \swarrow$   
 $20$

g)  $12 \xrightarrow{-3} \boxed{\phantom{00}}$   
 $- \boxed{\phantom{00}} \searrow \swarrow$   
 $10$

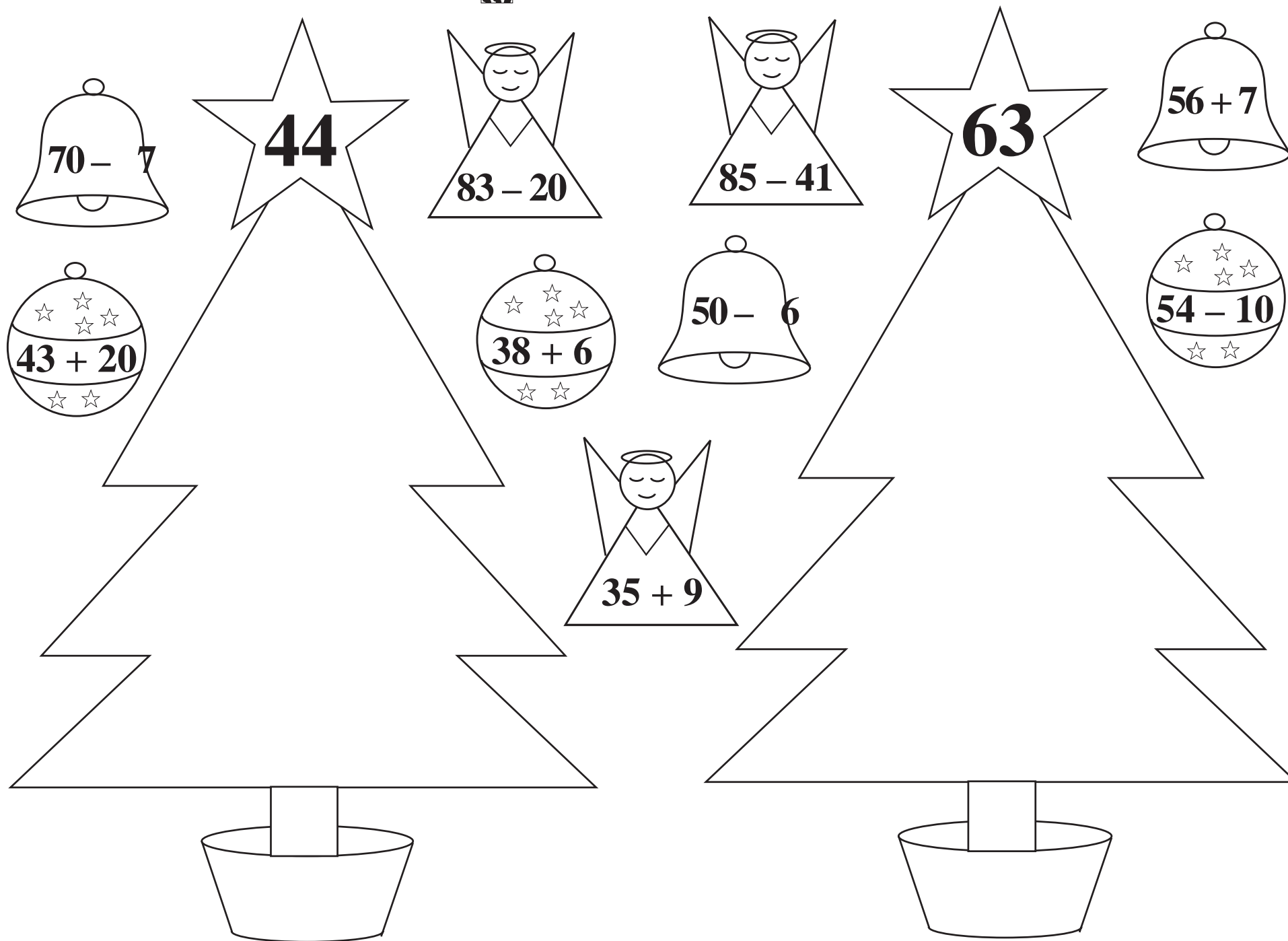
h)  $14 \xrightarrow{-6} \boxed{\phantom{00}}$   
 $- \boxed{\phantom{00}} \searrow \swarrow$   
 $10$

i)  $11 \xrightarrow{-5} \boxed{\phantom{00}}$   
 $- \boxed{\phantom{00}} \searrow \swarrow$   
 $10$

j)  $22 \xrightarrow{-3} \boxed{\phantom{00}}$   
 $- \boxed{\phantom{00}} \searrow \swarrow$   
 $20$

k)  $24 \xrightarrow{-6} \boxed{\phantom{00}}$   
 $- \boxed{\phantom{00}} \searrow \swarrow$   
 $20$

l)  $21 \xrightarrow{-5} \boxed{\phantom{00}}$   
 $- \boxed{\phantom{00}} \searrow \swarrow$   
 $20$



—	32	45	38	56	73	84	21	97	69
8	30	40							
	24								

LP 48/2

<i>a</i>	6	11	0	20	31	7	27				29	8	28	36	
<i>b</i>	10	15			35			41	13	23					50

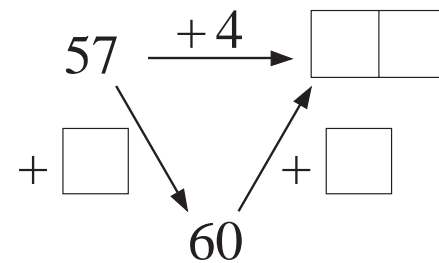
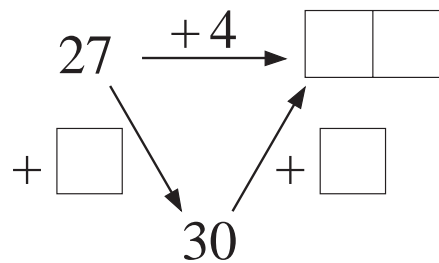
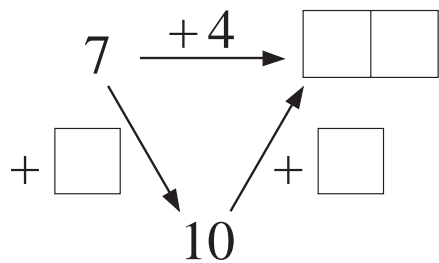
*Rule:*

LP 48/8

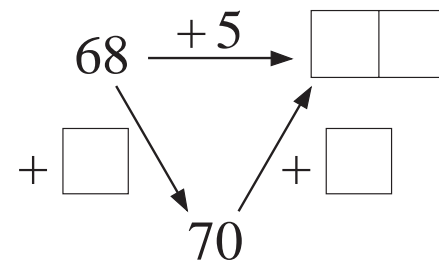
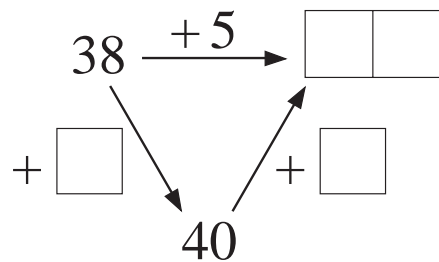
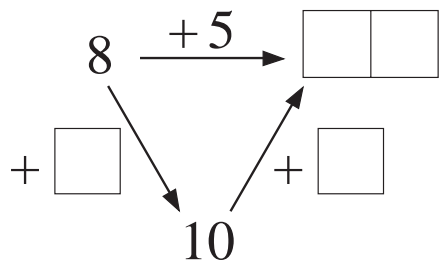


<b>+</b>	<b>20</b>	<b>21</b>	<b>22</b>	<b>23</b>	<b>24</b>	<b>25</b>	<b>26</b>	<b>27</b>	<b>28</b>	<b>29</b>
<b>30</b>	50	51			54					
<b>31</b>	51	52				56		58		
<b>32</b>	52						58			
<b>33</b>				56						62
<b>34</b>		55						61		
<b>35</b>						60			63	64
<b>36</b>			58				62			
<b>37</b>					61					
<b>38</b>			60						66	
<b>39</b>		60		62						

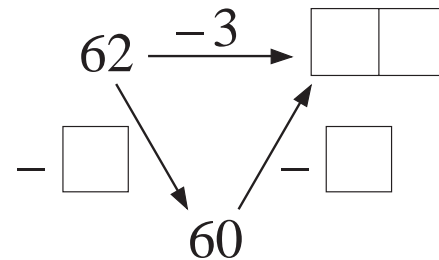
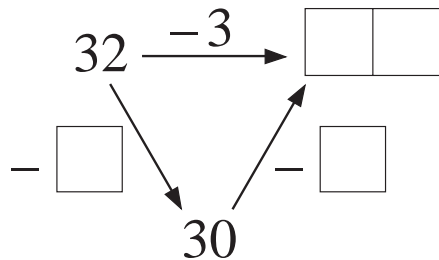
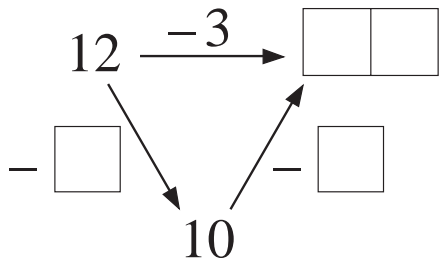
a)



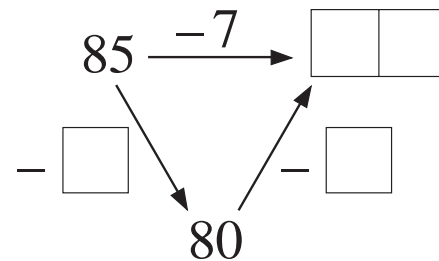
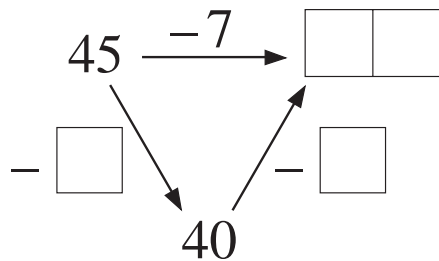
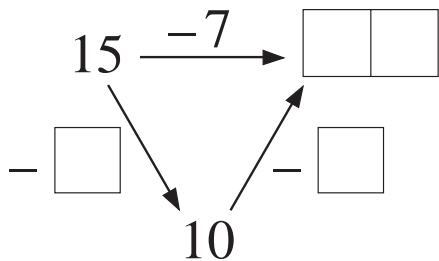
b)



c)



d)



100 - 8

39 + 6

49 + 6

36 + 10

69 + 9

60 - 5

90 - 8

17 + 10

68 + 7

28 + 8

18 + 9

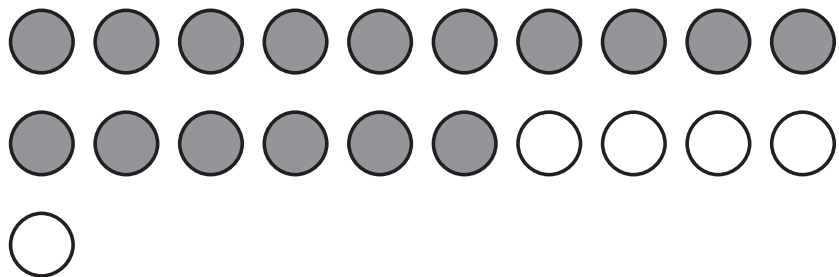
58 + 4

39 + 7

78 + 4

50 - 5

a)



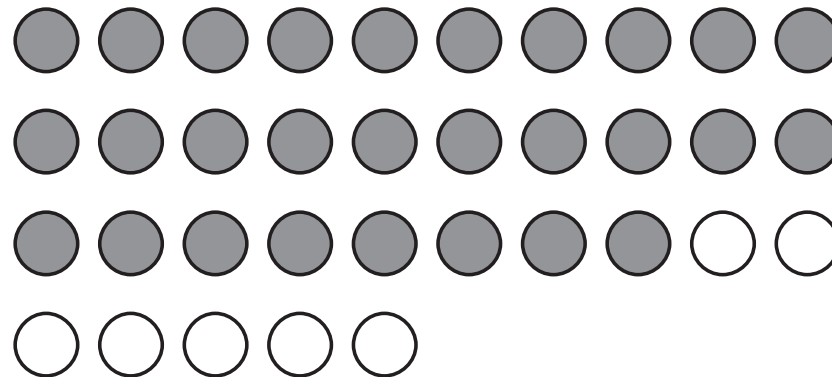
$$16 + \square = \square \square$$

$$16 + \square + \square$$

$$21 - \square = \square \square$$

$$21 - \square - \square$$

b)



$$28 + \square = \square \square$$

$$28 + \square + \square$$

$$35 - \square = \square \square$$

$$35 - \square - \square$$

a)

Had	Receives
<input type="text"/> <input type="text"/>	<input type="text"/> <input type="text"/>

<input type="text"/>	<input type="text"/>	<input type="text"/>	<input type="text"/>	<input type="text"/>	<input type="text"/>	<input type="text"/>	<input type="text"/>
----------------------	----------------------	----------------------	----------------------	----------------------	----------------------	----------------------	----------------------

b)

Had	Receives
<input type="text"/> <input type="text"/>	<input type="text"/> <input type="text"/>

<input type="text"/>	<input type="text"/>	<input type="text"/>	<input type="text"/>	<input type="text"/>	<input type="text"/>	<input type="text"/>	<input type="text"/>
----------------------	----------------------	----------------------	----------------------	----------------------	----------------------	----------------------	----------------------

c)

Had	Spends
<input type="text"/> <input type="text"/> <input type="text"/> <input type="text"/>	<input type="text"/> <input type="text"/>

<input type="text"/>	<input type="text"/>	<input type="text"/>	<input type="text"/>	<input type="text"/>	<input type="text"/>	<input type="text"/>	<input type="text"/>
----------------------	----------------------	----------------------	----------------------	----------------------	----------------------	----------------------	----------------------

d)

Had	Spends
<input type="text"/> <input type="text"/> <input type="text"/> <input type="text"/>	<input type="text"/> <input type="text"/>

<input type="text"/>	<input type="text"/>	<input type="text"/>	<input type="text"/>	<input type="text"/>	<input type="text"/>	<input type="text"/>	<input type="text"/>
----------------------	----------------------	----------------------	----------------------	----------------------	----------------------	----------------------	----------------------



$80 - 11$

LXIX

$60 + 9$

$40 - 6$

$28 + 6$

$56 + 37$

XXXIV

$100 - 7$

XCIII

LP 49/9

P	33	55	48	69	27	56	29	38				
D									70	90	45	61

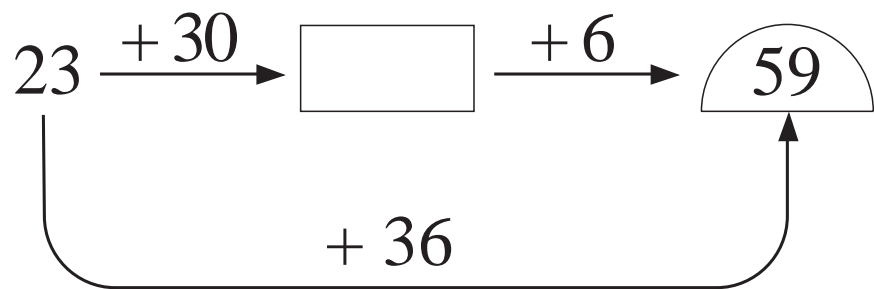
$24 >$

$D =$

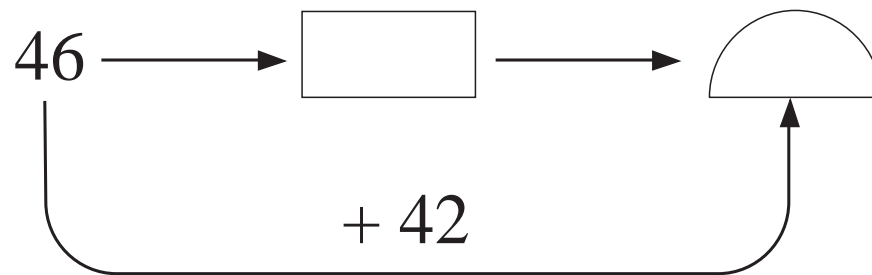
$P =$

$24 =$

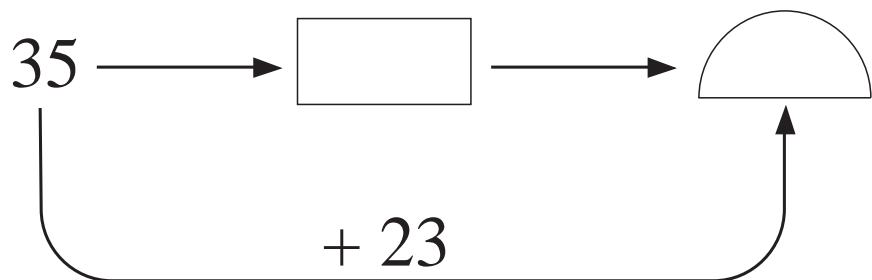
a)



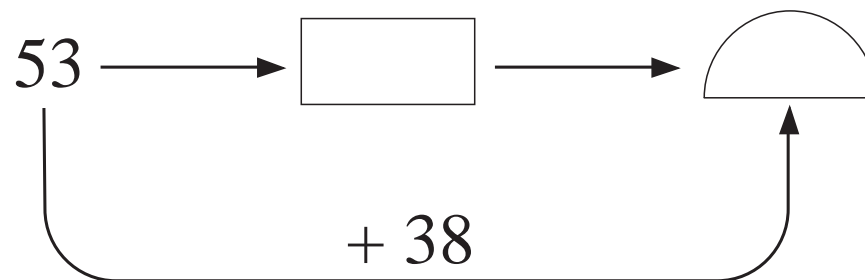
b)



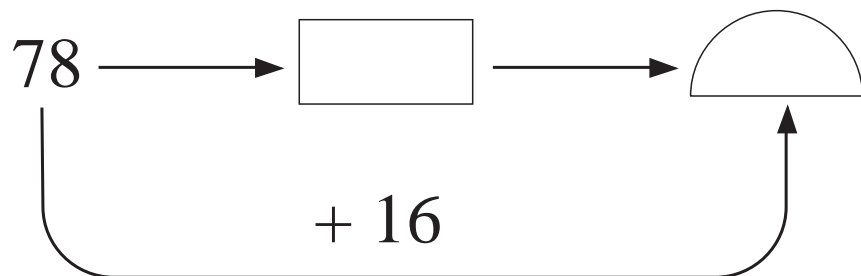
c)



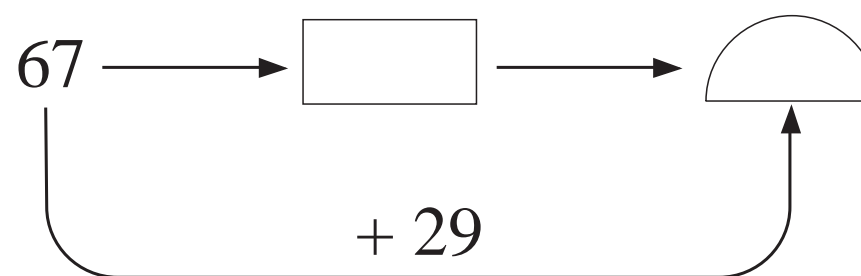
d)



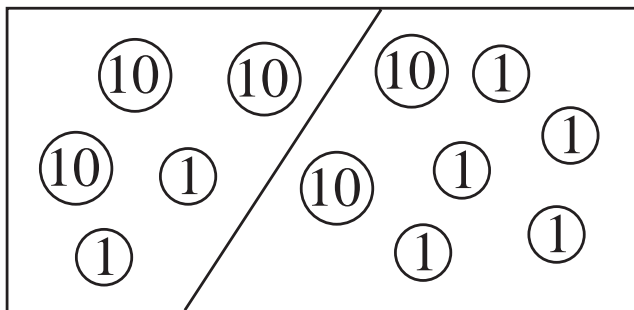
e)



f)



a)



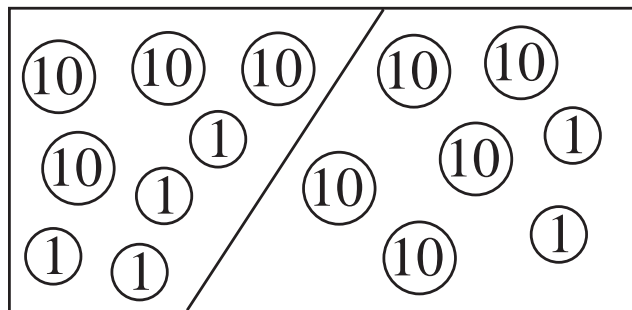
3	2	+	2	5	=		
---	---	---	---	---	---	--	--

		+			=		
--	--	---	--	--	---	--	--

		-	3	2	=		
--	--	---	---	---	---	--	--

		-	2	5	=		
--	--	---	---	---	---	--	--

b)



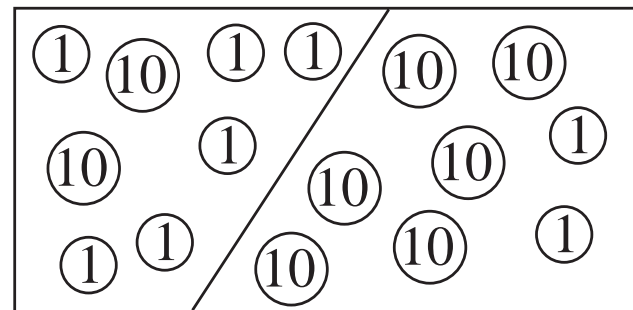
--	--	--	--	--	--	--	--

--	--	--	--	--	--	--	--

--	--	--	--	--	--	--	--

--	--	--	--	--	--	--	--

c)



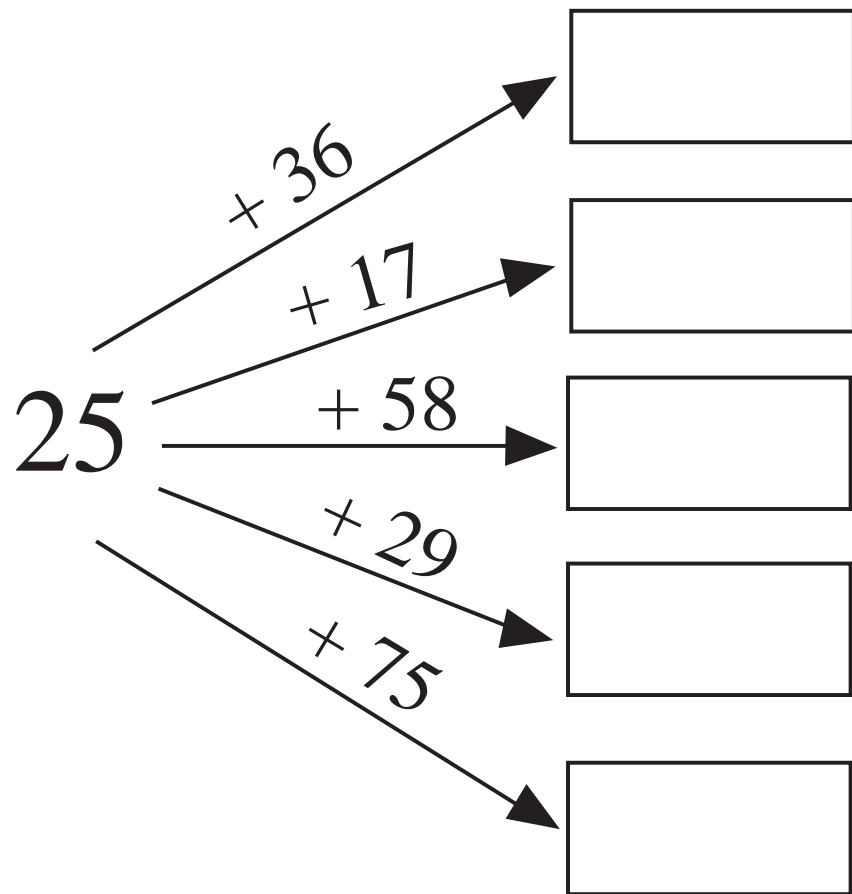
--	--	--	--	--	--	--	--

--	--	--	--	--	--	--	--

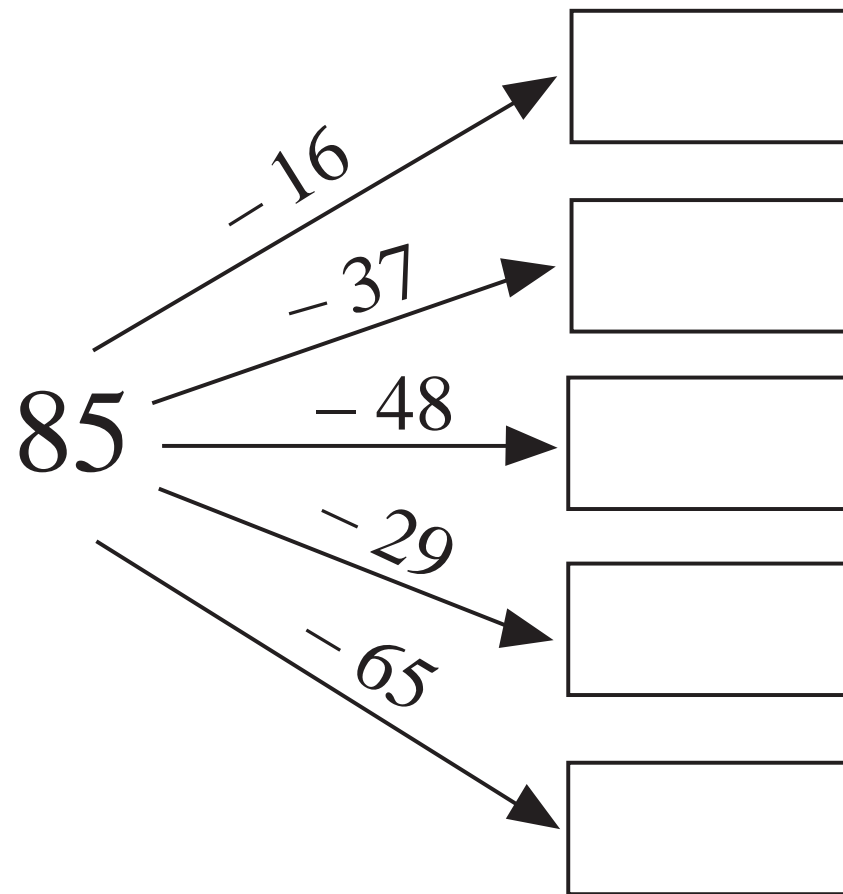
--	--	--	--	--	--	--	--

--	--	--	--	--	--	--	--

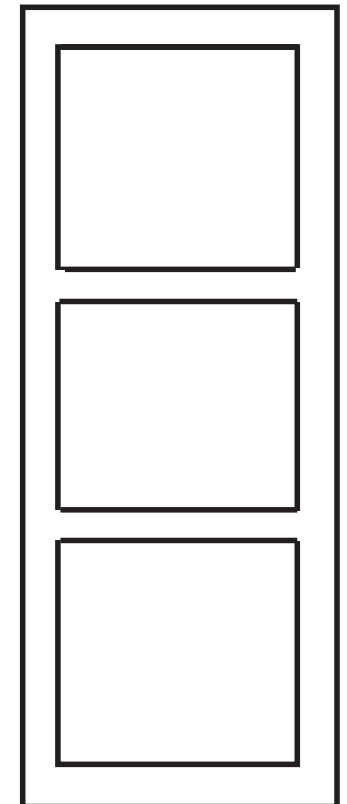
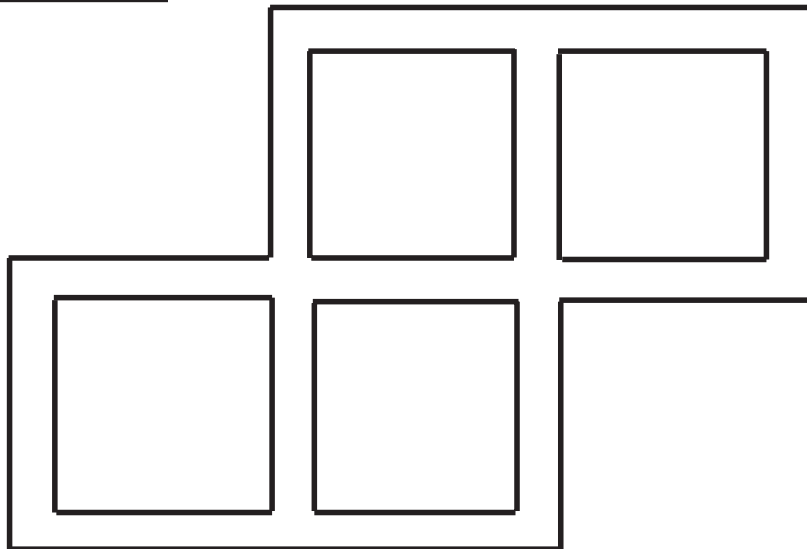
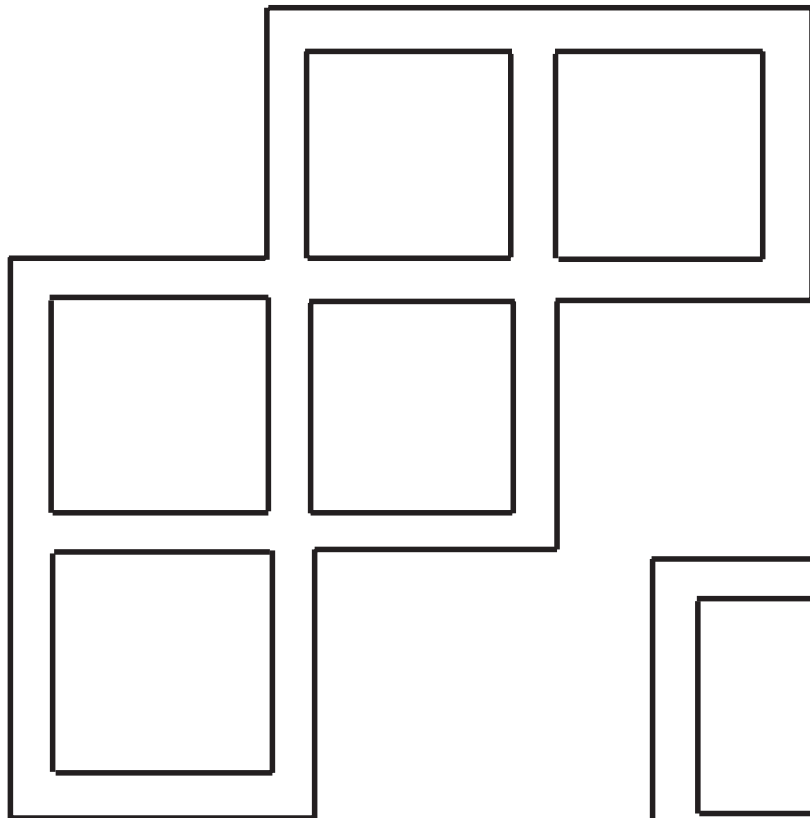
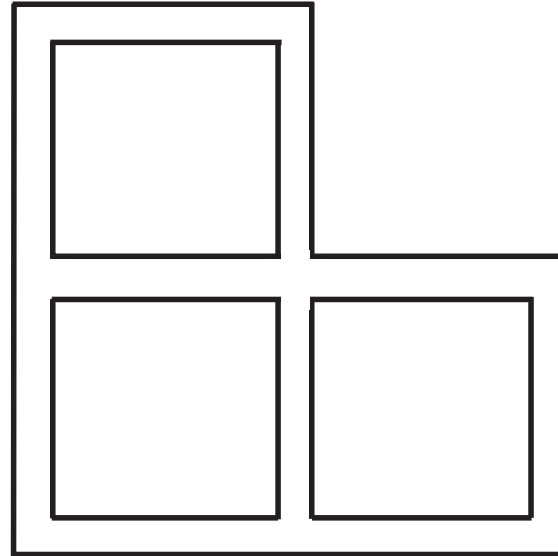
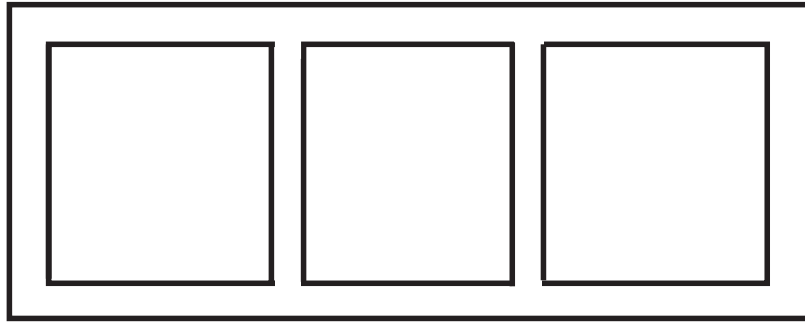
a)



b)



9	1	7	7	0	6	9	9
3	5	5	4	2	1	3	3
5	0	7	8	8	4	3	8
8	1	6	4	4	7	6	9
8	8	5	4	5	1	2	7



a)

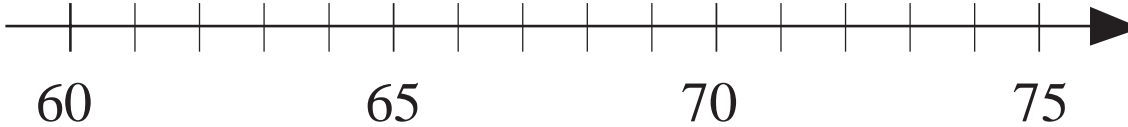
$$18 \xrightarrow{+12} \square \xrightarrow{+36} \square \xrightarrow{+17} \square \xrightarrow{+9} \square \xrightarrow{-12} \square$$

b)

$$22 \xrightarrow{+14} \square \xrightarrow{+27} \square \xrightarrow{+19} \square \xrightarrow{-34} \square \xrightarrow{-48} \square$$

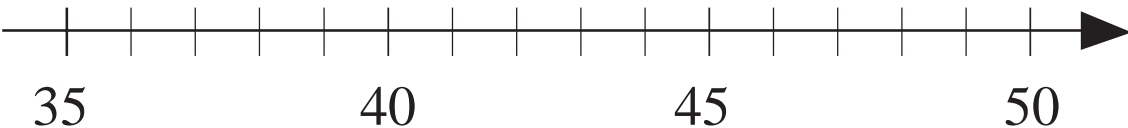
LP 51/2

a)

$$62 + 7 > \triangle > 65 - 4$$


$\triangle$  : .....

b)

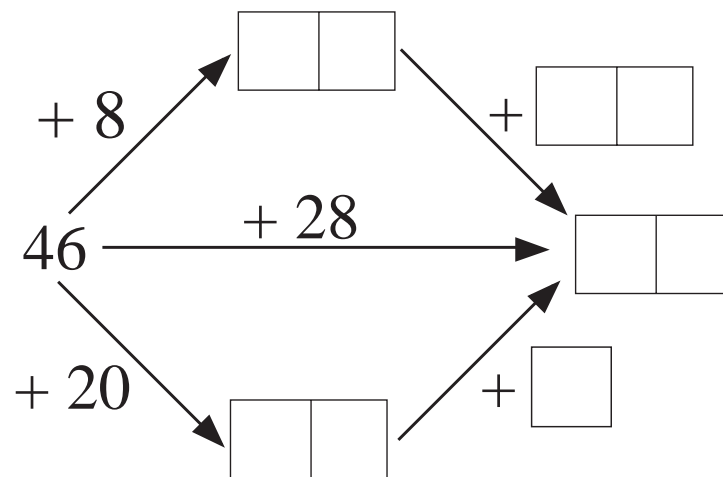
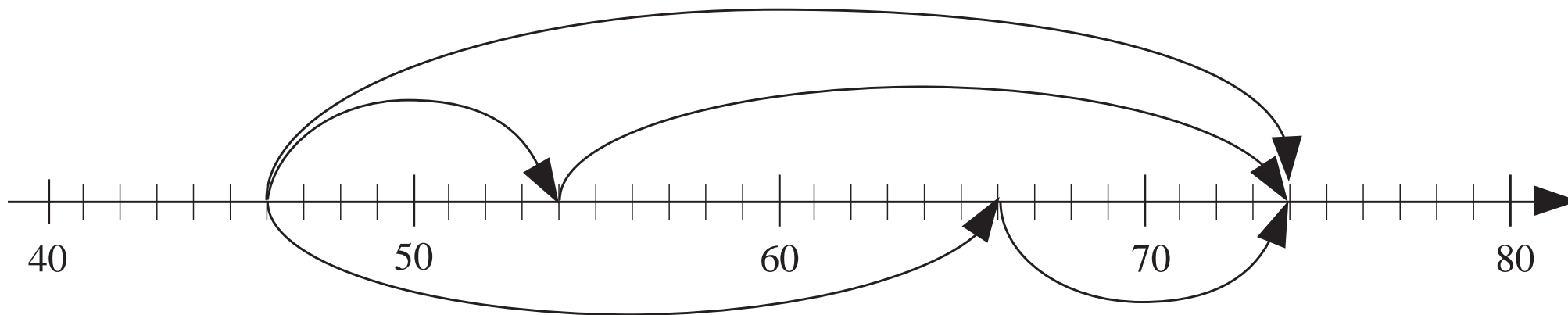
$$48 - 8 < \bullet + 3 < 42 + 7$$


$\bullet$  : .....


LP 51/3

<table border="1" style="border-collapse: collapse; width: 100%; height: 100%;"> <tr><td style="text-align: center;">20</td></tr> <tr><td style="text-align: center;">10</td></tr> <tr><td style="text-align: center;">5</td></tr> <tr><td style="border: none;"> </td></tr> <tr><td style="border: none;"> </td></tr> </table>	20	10	5			+	<table border="1" style="border-collapse: collapse; width: 100%; height: 100%;"> <tr><td style="text-align: center;">20</td></tr> <tr><td style="border: none;"> </td></tr> <tr><td style="border: none;"> </td></tr> </table>	20			=	<table border="1" style="border-collapse: collapse; width: 100%; height: 100%;"> <tr><td style="border: none;"> </td></tr> <tr><td style="border: none;"> </td></tr> </table>						
	20																	
	10																	
	5																	
20																		
+	<table border="1" style="border-collapse: collapse; width: 100%; height: 100%;"> <tr><td style="text-align: center;">5</td><td style="text-align: center;">2</td></tr> <tr><td style="border: none;"> </td><td style="border: none;"> </td></tr> <tr><td style="border: none;"> </td><td style="border: none;"> </td></tr> </table>	5	2					=	<table border="1" style="border-collapse: collapse; width: 100%; height: 100%;"> <tr><td style="border: none;"> </td><td style="border: none;"> </td></tr> <tr><td style="border: none;"> </td><td style="border: none;"> </td></tr> </table>									
5	2																	
+	<table border="1" style="border-collapse: collapse; width: 100%; height: 100%;"> <tr><td style="text-align: center;">20</td><td style="text-align: center;">5</td><td style="text-align: center;">2</td></tr> <tr><td style="border: none;"> </td><td style="border: none;"> </td><td style="border: none;"> </td></tr> <tr><td style="border: none;"> </td><td style="border: none;"> </td><td style="border: none;"> </td></tr> </table>	20	5	2							=	<table border="1" style="border-collapse: collapse; width: 100%; height: 100%;"> <tr><td style="border: none;"> </td><td style="border: none;"> </td><td style="border: none;"> </td></tr> <tr><td style="border: none;"> </td><td style="border: none;"> </td><td style="border: none;"> </td></tr> </table>						
20	5	2																
-	<table border="1" style="border-collapse: collapse; width: 100%; height: 100%;"> <tr><td style="text-align: center;">20</td></tr> <tr><td style="border: none;"> </td></tr> <tr><td style="border: none;"> </td></tr> </table>	20			=	<table border="1" style="border-collapse: collapse; width: 100%; height: 100%;"> <tr><td style="border: none;"> </td><td style="border: none;"> </td></tr> <tr><td style="border: none;"> </td><td style="border: none;"> </td></tr> </table>												
20																		
-	<table border="1" style="border-collapse: collapse; width: 100%; height: 100%;"> <tr><td style="text-align: center;">5</td><td style="text-align: center;">2</td></tr> <tr><td style="border: none;"> </td><td style="border: none;"> </td></tr> <tr><td style="border: none;"> </td><td style="border: none;"> </td></tr> </table>	5	2					=	<table border="1" style="border-collapse: collapse; width: 100%; height: 100%;"> <tr><td style="border: none;"> </td><td style="border: none;"> </td></tr> <tr><td style="border: none;"> </td><td style="border: none;"> </td></tr> </table>									
5	2																	
-	<table border="1" style="border-collapse: collapse; width: 100%; height: 100%;"> <tr><td style="text-align: center;">20</td><td style="text-align: center;">5</td><td style="text-align: center;">2</td></tr> <tr><td style="border: none;"> </td><td style="border: none;"> </td><td style="border: none;"> </td></tr> <tr><td style="border: none;"> </td><td style="border: none;"> </td><td style="border: none;"> </td></tr> </table>	20	5	2							=	<table border="1" style="border-collapse: collapse; width: 100%; height: 100%;"> <tr><td style="border: none;"> </td><td style="border: none;"> </td><td style="border: none;"> </td></tr> <tr><td style="border: none;"> </td><td style="border: none;"> </td><td style="border: none;"> </td></tr> </table>						
20	5	2																

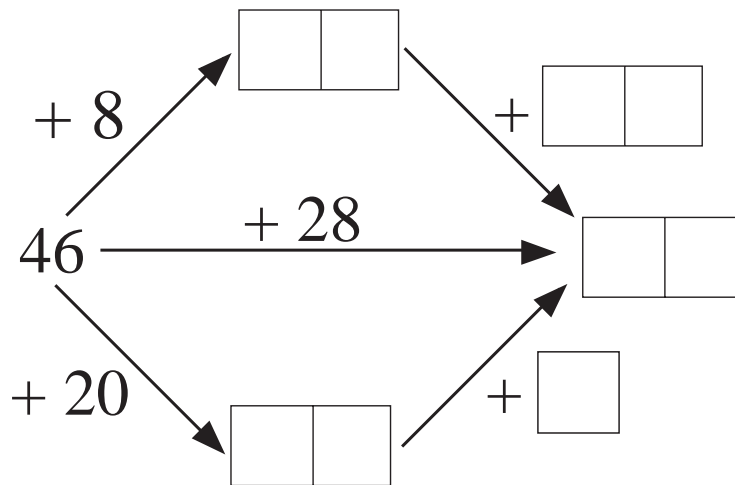
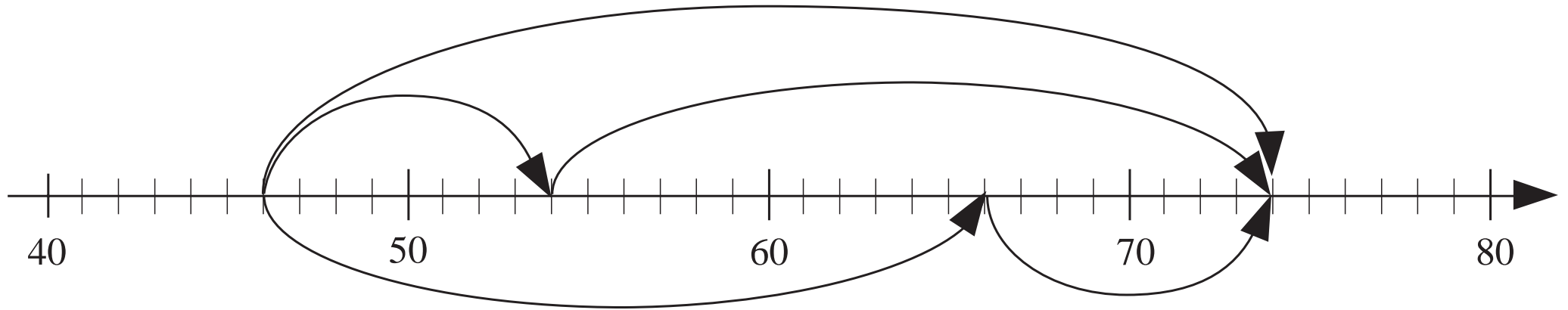


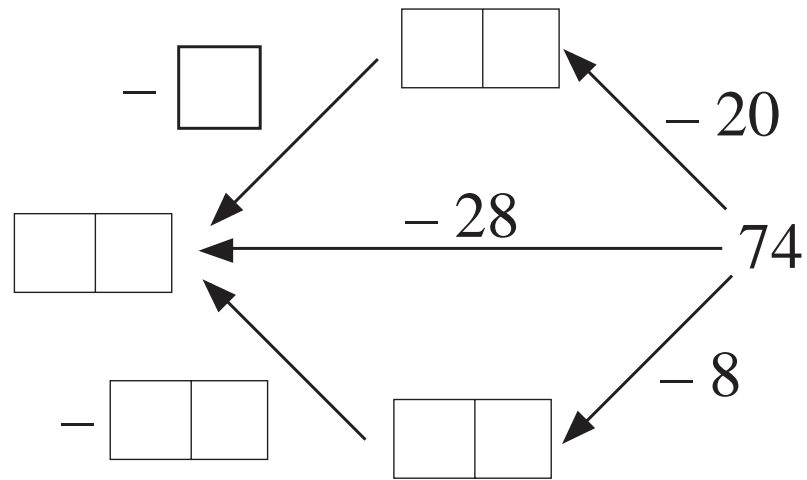
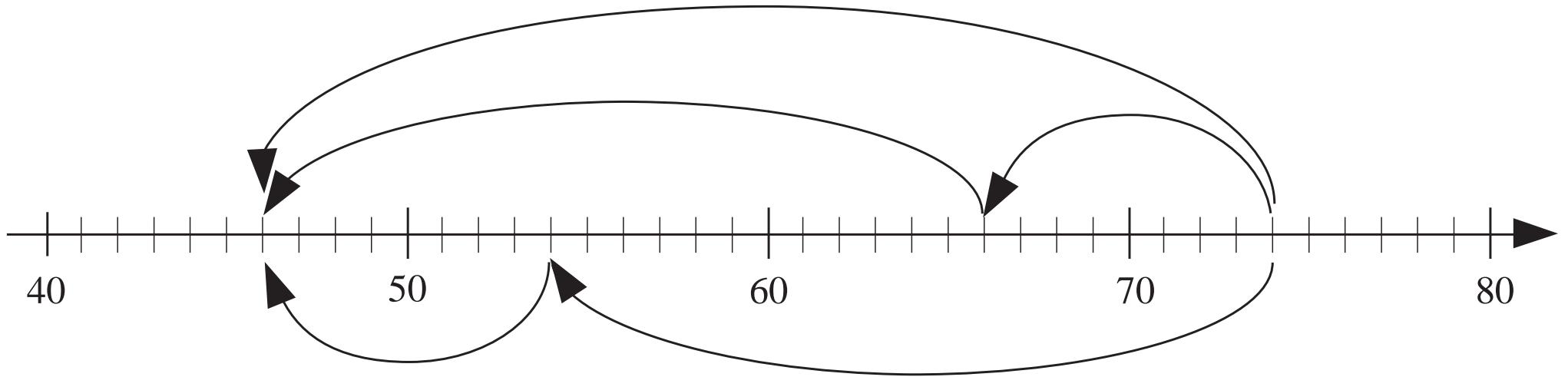


<table border="1" style="border-collapse: collapse; width: 100%; text-align: center;"> <tr><td style="border: none;">20</td></tr> <tr><td style="border: none;">10</td></tr> <tr><td style="border: none;">5</td></tr> <tr><td style="border: none;"> </td></tr> <tr><td style="border: none;"> </td></tr> </table>	20	10	5			+	<table border="1" style="border-collapse: collapse; width: 100%; text-align: center;"> <tr><td style="border: none;">20</td></tr> <tr><td style="border: none;"> </td></tr> <tr><td style="border: none;"> </td></tr> </table>	20			=	<table border="1" style="border-collapse: collapse; width: 100%; text-align: center;"> <tr><td style="border: none;"> </td></tr> <tr><td style="border: none;"> </td></tr> <tr><td style="border: none;"> </td></tr> </table>						
	20																	
	10																	
	5																	
20																		
+	<table border="1" style="border-collapse: collapse; width: 100%; text-align: center;"> <tr><td style="border: none;">5</td><td style="border: none;">2</td></tr> <tr><td style="border: none;"> </td><td style="border: none;"> </td></tr> <tr><td style="border: none;"> </td><td style="border: none;"> </td></tr> </table>	5	2					=	<table border="1" style="border-collapse: collapse; width: 100%; text-align: center;"> <tr><td style="border: none;"> </td><td style="border: none;"> </td></tr> <tr><td style="border: none;"> </td><td style="border: none;"> </td></tr> <tr><td style="border: none;"> </td><td style="border: none;"> </td></tr> </table>									
5	2																	
+	<table border="1" style="border-collapse: collapse; width: 100%; text-align: center;"> <tr><td style="border: none;">20</td><td style="border: none;">5</td><td style="border: none;">2</td></tr> <tr><td style="border: none;"> </td><td style="border: none;"> </td><td style="border: none;"> </td></tr> <tr><td style="border: none;"> </td><td style="border: none;"> </td><td style="border: none;"> </td></tr> </table>	20	5	2							=	<table border="1" style="border-collapse: collapse; width: 100%; text-align: center;"> <tr><td style="border: none;"> </td><td style="border: none;"> </td></tr> <tr><td style="border: none;"> </td><td style="border: none;"> </td></tr> <tr><td style="border: none;"> </td><td style="border: none;"> </td></tr> </table>						
20	5	2																
-	<table border="1" style="border-collapse: collapse; width: 100%; text-align: center;"> <tr><td style="border: none;">20</td></tr> <tr><td style="border: none;"> </td></tr> <tr><td style="border: none;"> </td></tr> </table>	20			=	<table border="1" style="border-collapse: collapse; width: 100%; text-align: center;"> <tr><td style="border: none;"> </td><td style="border: none;"> </td></tr> <tr><td style="border: none;"> </td><td style="border: none;"> </td></tr> <tr><td style="border: none;"> </td><td style="border: none;"> </td></tr> </table>												
20																		
-	<table border="1" style="border-collapse: collapse; width: 100%; text-align: center;"> <tr><td style="border: none;">5</td><td style="border: none;">2</td></tr> <tr><td style="border: none;"> </td><td style="border: none;"> </td></tr> <tr><td style="border: none;"> </td><td style="border: none;"> </td></tr> </table>	5	2					=	<table border="1" style="border-collapse: collapse; width: 100%; text-align: center;"> <tr><td style="border: none;"> </td><td style="border: none;"> </td></tr> <tr><td style="border: none;"> </td><td style="border: none;"> </td></tr> <tr><td style="border: none;"> </td><td style="border: none;"> </td></tr> </table>									
5	2																	
-	<table border="1" style="border-collapse: collapse; width: 100%; text-align: center;"> <tr><td style="border: none;">20</td><td style="border: none;">5</td><td style="border: none;">2</td></tr> <tr><td style="border: none;"> </td><td style="border: none;"> </td><td style="border: none;"> </td></tr> <tr><td style="border: none;"> </td><td style="border: none;"> </td><td style="border: none;"> </td></tr> </table>	20	5	2							=	<table border="1" style="border-collapse: collapse; width: 100%; text-align: center;"> <tr><td style="border: none;"> </td><td style="border: none;"> </td></tr> <tr><td style="border: none;"> </td><td style="border: none;"> </td></tr> <tr><td style="border: none;"> </td><td style="border: none;"> </td></tr> </table>						
20	5	2																



(20) (20) (20) (20) (20) (10) (5) (5) (5) (5) (5) (2) (2) (2) (2)

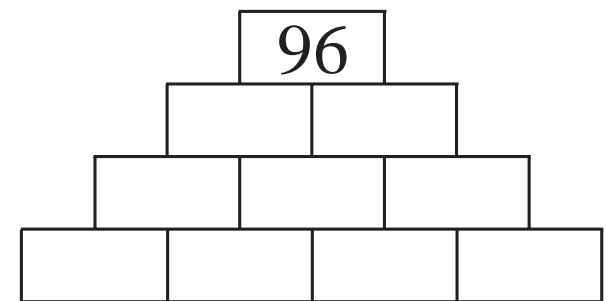
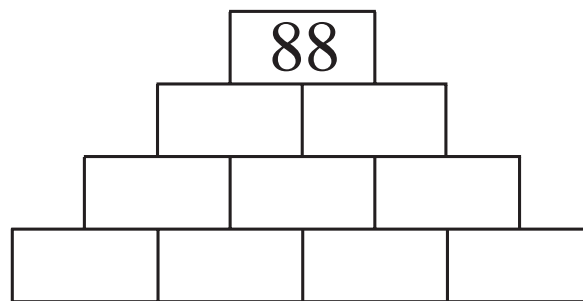
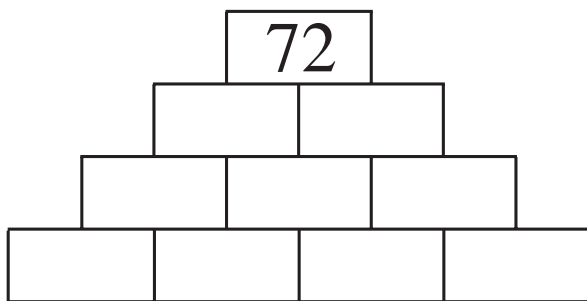


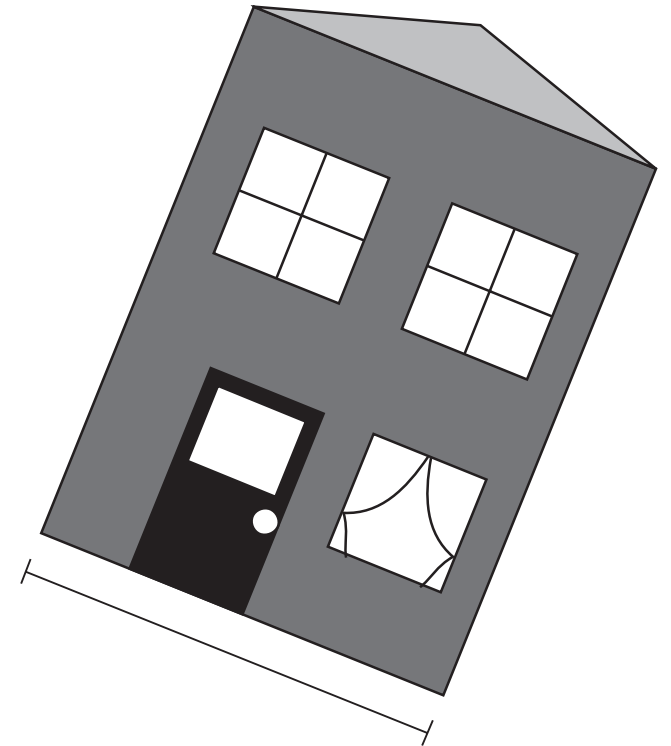




S	84	73	58	67	90	100					
K							18	39	23	42	55

K = ..... S = ..... 37 = .....

LP 52/7





50 cm

4 m

8 m

1 m 30 cm

a) 2 yellow strips:

$$\square + \square = \square \square \text{ cm}$$

$$\square \text{ times } 5 \text{ cm} = \square \square \text{ cm}$$

b) 4 yellow strips:

$$\square + \square + \square + \square = \square \square \text{ cm}$$

$$\square \text{ times } 5 \text{ cm} = \square \square \text{ cm}$$

c) 8 yellow strips:

$$\square + \square + \square + \square + \square + \square + \square + \square = \square \square \text{ cm}$$

$$\square \text{ times } 5 \text{ cm} = \square \square \text{ cm}$$



What is the total length of 5 strips if:

a) each strip is 4 cm long

$$\square + \square + \square + \square + \square = \square \square \text{ cm}$$

$$\square \text{ times } 4 \text{ cm} = \square \square \text{ cm}$$

b) each strip is 8 cm long:


$$\square + \square + \square + \square + \square = \square \square \text{ cm}$$

$$\square \text{ times } 8 \text{ cm} = \square \square \text{ cm}$$



	<i>Name</i>	<i>Estimated number of steps</i>	<i>Actual number of steps</i>	<i>Length of step</i>
<b>P<sub>1</sub></b>				
<b>P<sub>2</sub></b>				
<b>P<sub>3</sub></b>				

*Measured width of room:*



LP 54/7

$$35 + 25 + 6$$

$$70 - 4$$

$$2 + 60 + 4$$

$$80 \text{ cm} - 4 \text{ cm}$$

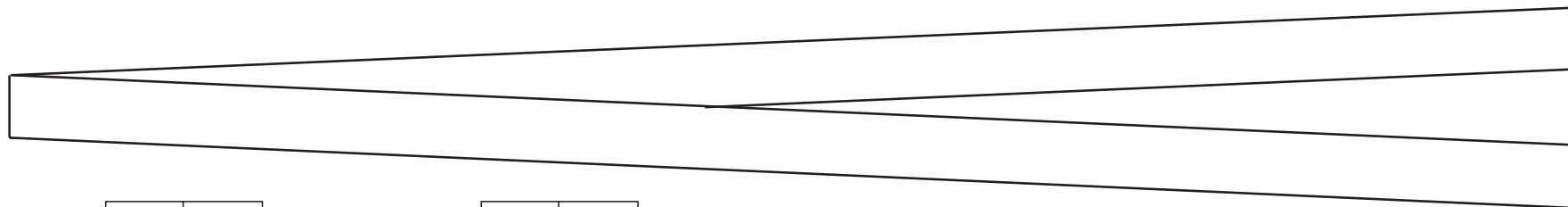
$$43 + 29 - 6$$

$$11 \text{ times } 6$$

$$90 - 20 - 4$$

$1 \text{ m} < \text{height} \leq 1 \text{ m } 10 \text{ cm}$	
$1 \text{ m } 10 \text{ cm} < \text{height} \leq 1 \text{ m } 20 \text{ cm}$	
$1 \text{ m } 20 \text{ cm} < \text{height} \leq 1 \text{ m } 30 \text{ cm}$	
$1 \text{ m } 30 \text{ cm} < \text{height} \leq 1 \text{ m } 40 \text{ cm}$	
$1 \text{ m } 40 \text{ cm} < \text{height} \leq 1 \text{ m } 50 \text{ cm}$	

a)


 2 times 

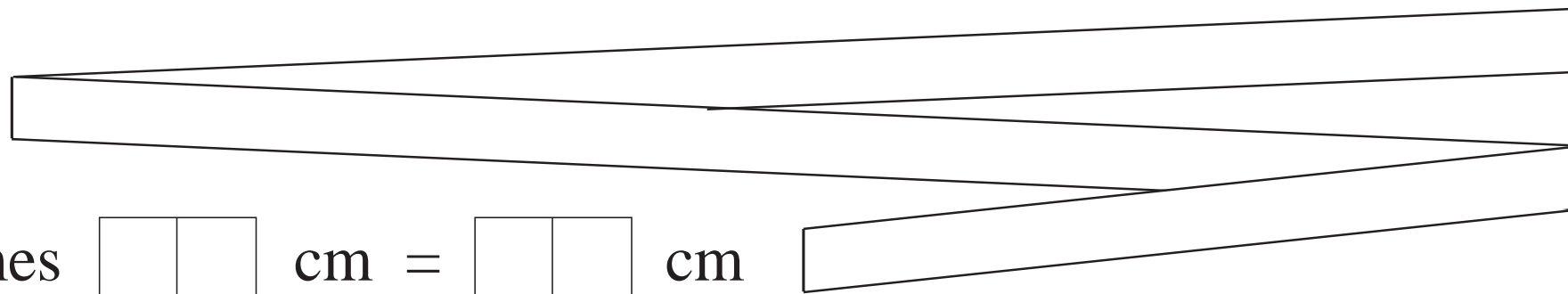
--	--

 cm = 

--	--

 cm

b)


 2 times 

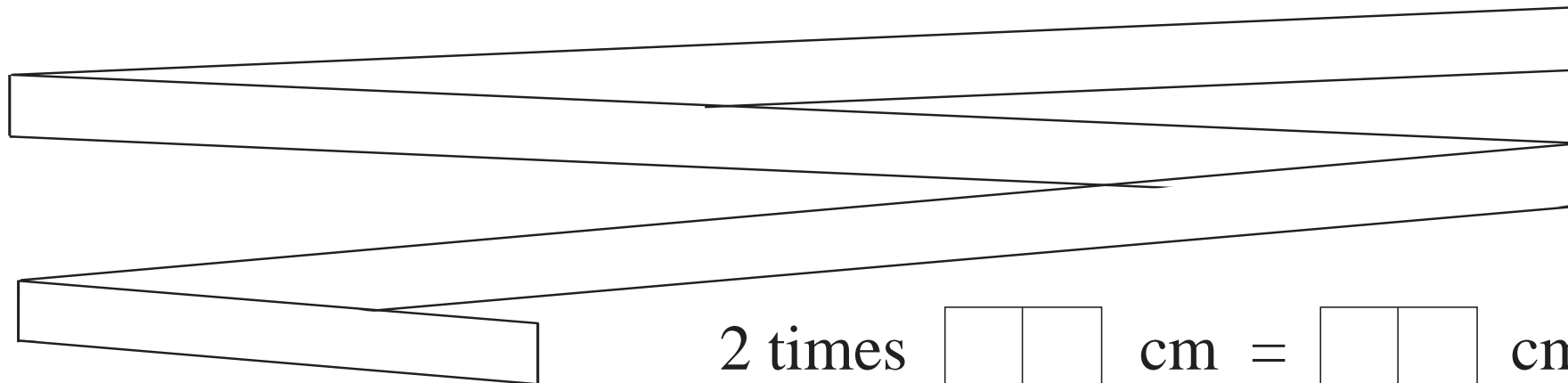
--	--

 cm = 

--	--

 cm

c)


 2 times 

--	--


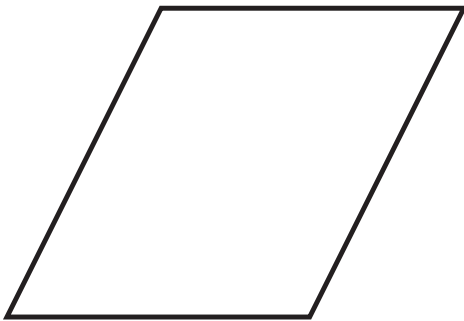
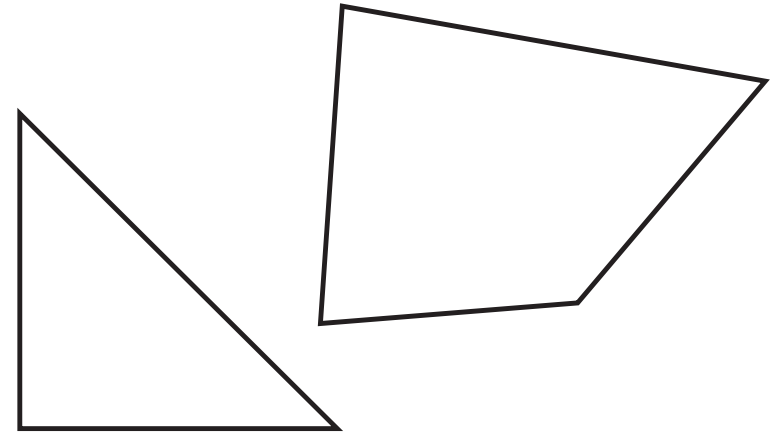
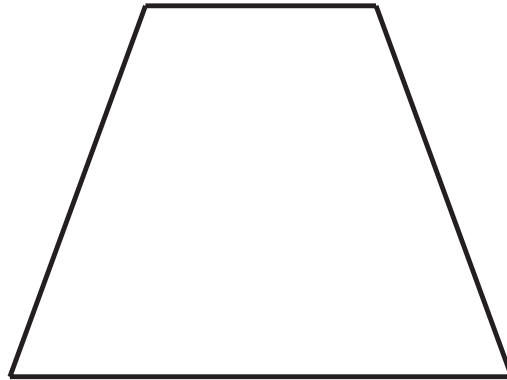




 cm = 

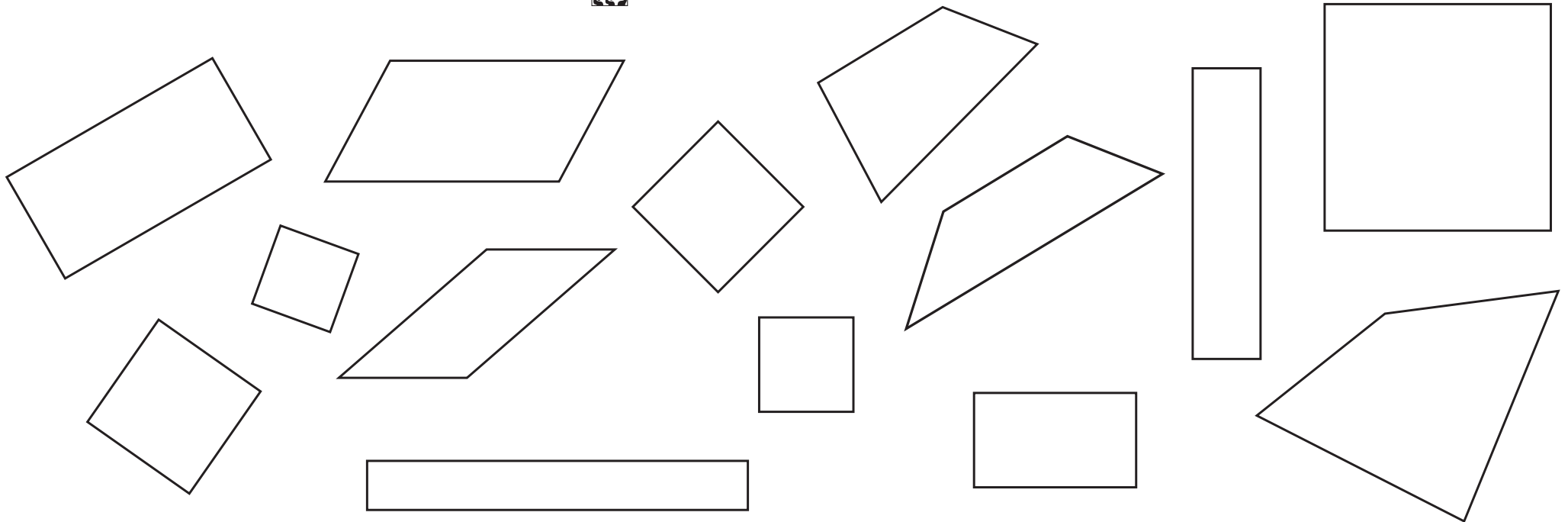
--	--

 cm




	Estimate	Measurement	Difference
a			
b			
c			
d			
e			











LP 57/4



✂ LP57/7


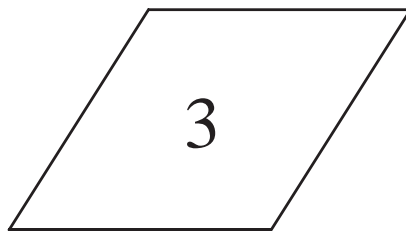




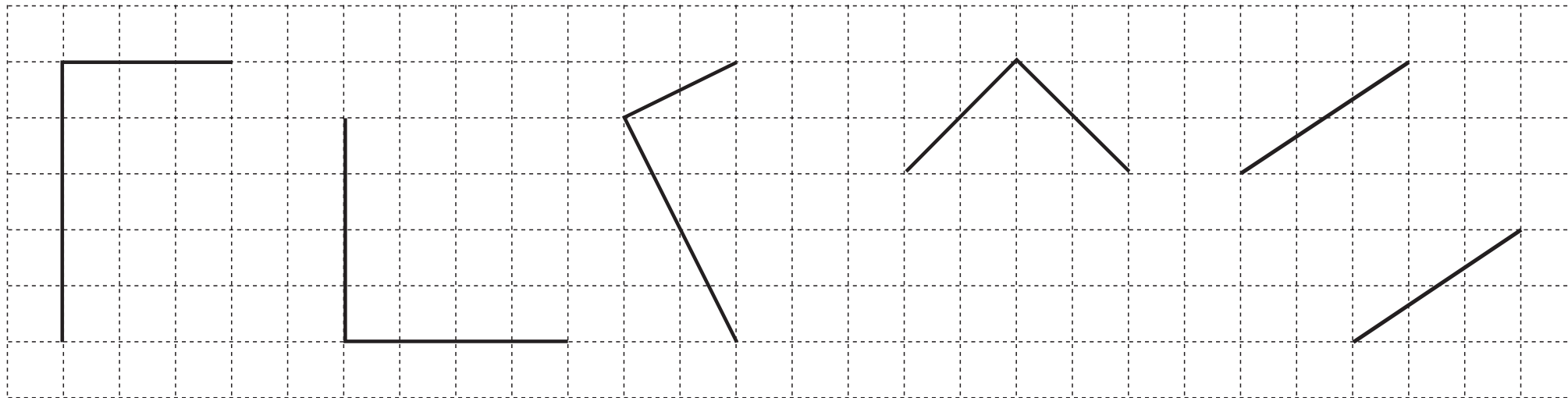
	12	33	41	18	45	36	27	48			44	43		
	16	29	24	27	19	36			32	25	18		90	
	28	62	65				39	59	64	36		81	100	



LP 58/3



LP 58/6




LP 58/7




Rectangles: . . . . .

Squares: . . . . .



Rectangles: . . . . .

Squares: . . . . .



Rectangles: . . . .

Squares: . . . .

LP 58/8



$19 + 19$

$42$

$100 - 62$

$27 + 15$

$38$

$88 - 24$

$28 + 28$

$64$

$53 - 11$

$36 + 16$

$52$

$43 + 9$

$39 + 25$

$56$

$70 - 26$

$18 + 26$

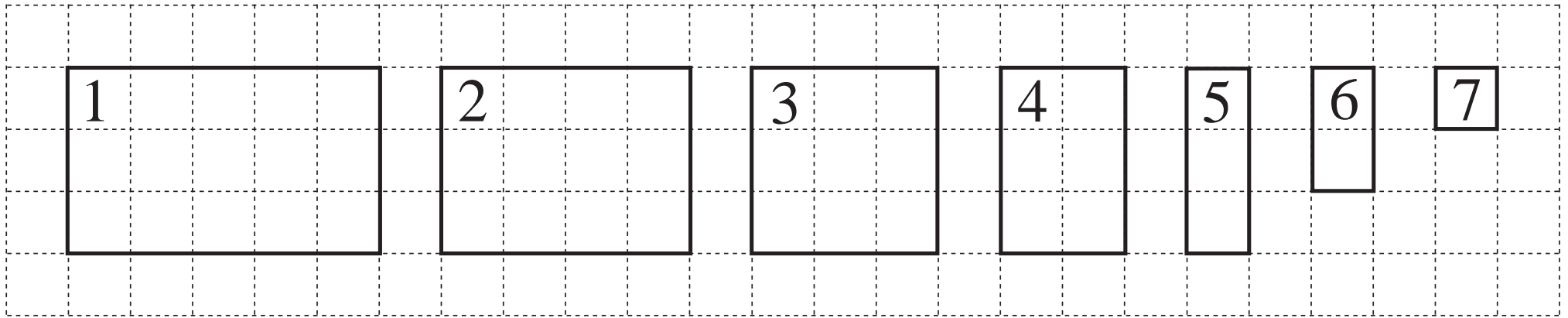
$62$

$25 + 31$

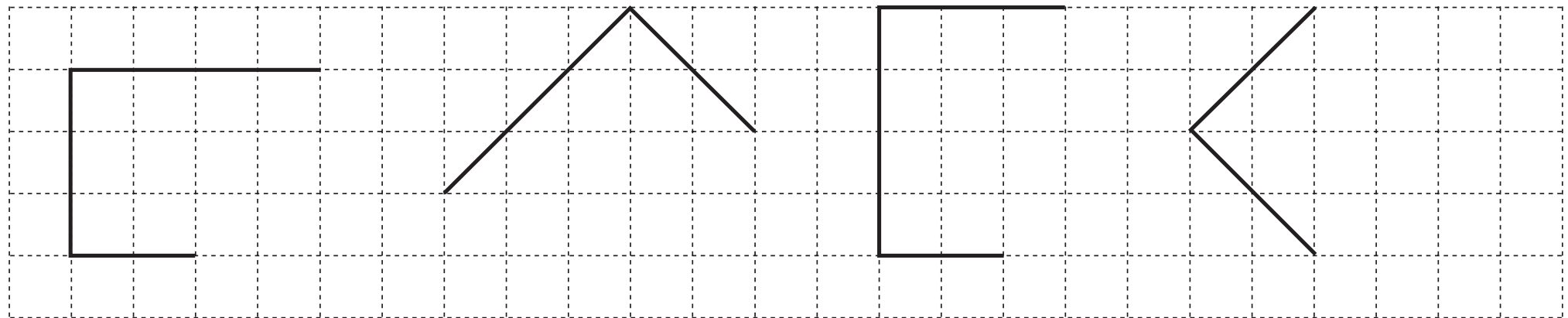
$43 + 19$

$44$


$90 - 28$

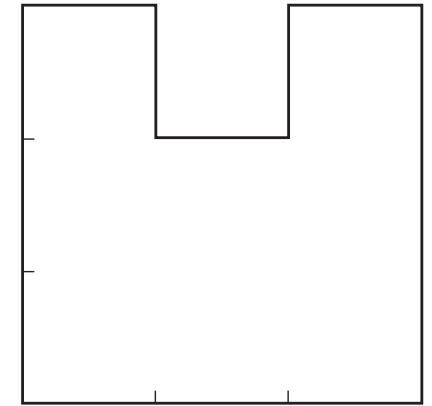
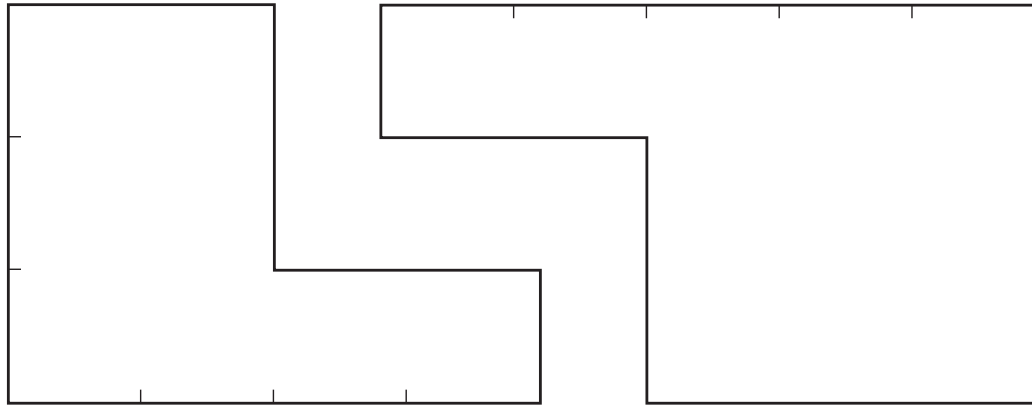
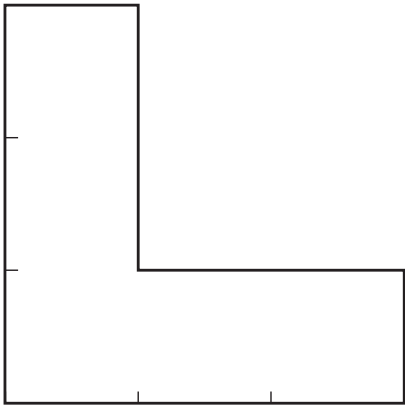


LP 59/3

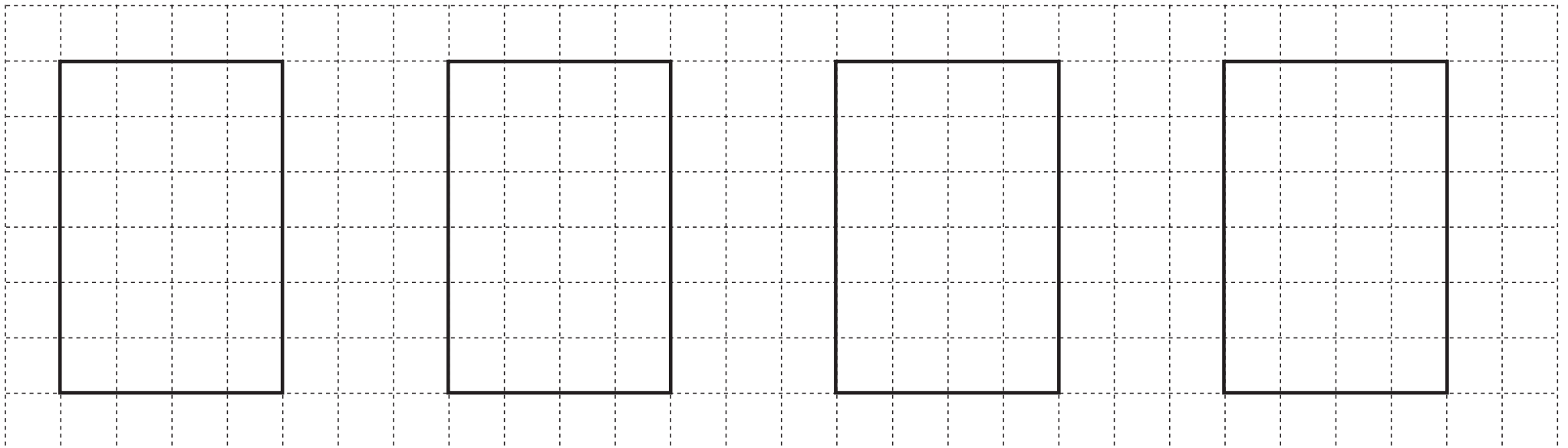


LP 59/4





LP 59/8



LP 60/4

$$\square + \square + \square + 4 = 25$$

$$\triangle + \triangle + 5 = 60$$

$$\bigcirc + \bigcirc + 3 = 53$$

$$\square + \square + \square + 13 = 40$$





a)  $40 + 33 < \triangle < 100 - 23$

$\triangle$  : .....

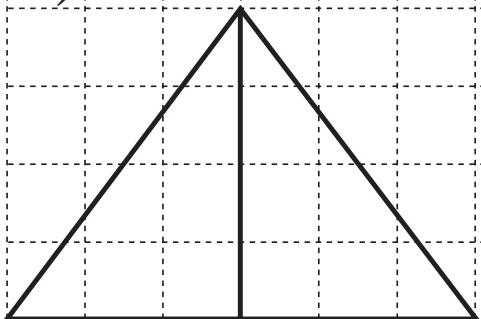
b)  $87 - 4 < 80 + \bigcirc < 92 - 5$

$80 + \bigcirc$  : .....

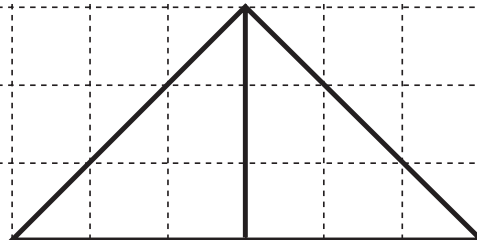
$\bigcirc$  : .....



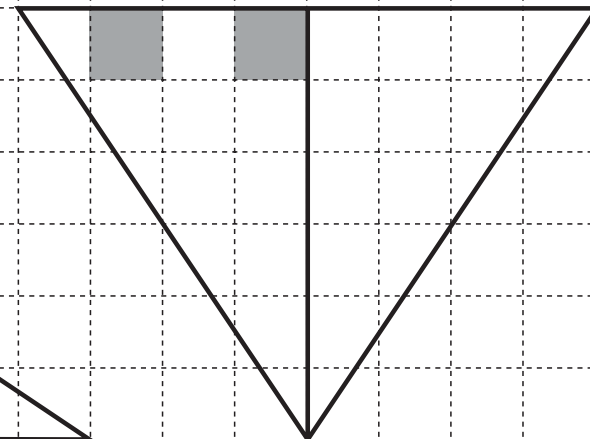
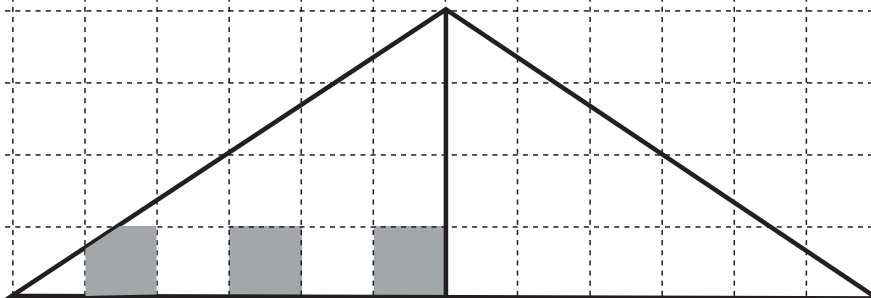

a)




b)



LP 60/7



LP 60/8



$$92 - 56$$

$$54 - 37$$

$$87 - 29$$

$$55 - 39$$


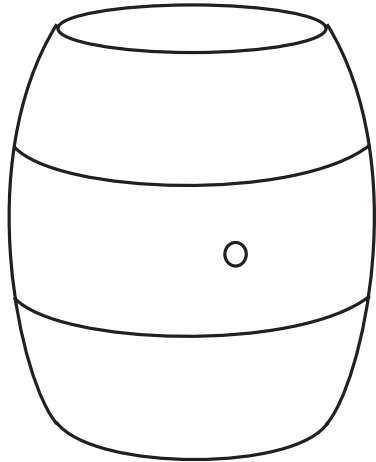
$$65 - 48$$

$$84 - 26$$

$$72 - 36$$

$$43 - 27$$

LP 61/2



50 cl

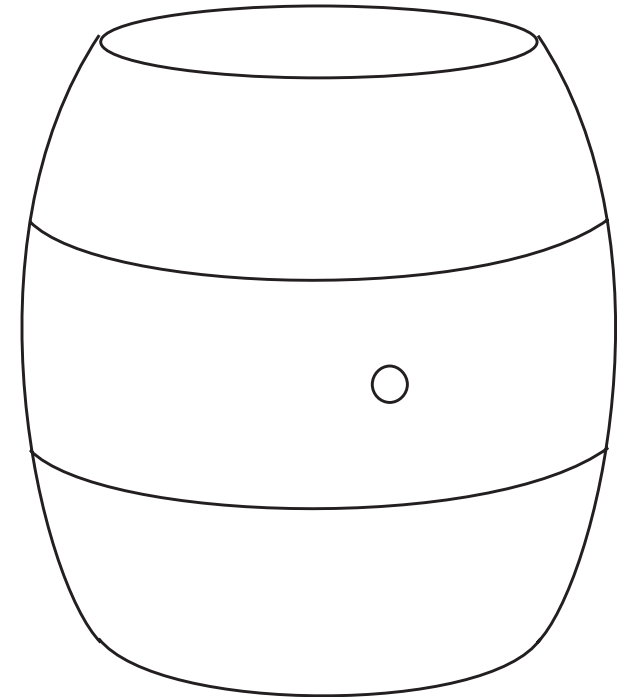

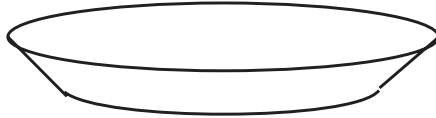
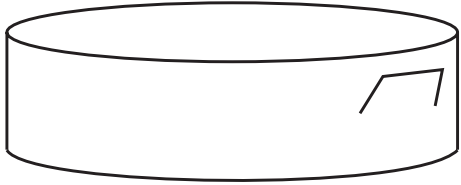
10 litres


2 cl

100 litres

2 litres

20 cl





3 litres

3 litres 20 cl

2 litres

2 litres 60 cl

40 cl

1 litre 80 cl

10 litres

5 litres 5 cl



$$93 + 5$$

$$38 + 6$$

$$21 + 16$$

$$67 - 27$$

$$50 - 24$$

$$70 - 28$$

$$88 + 7$$

$$80 - 13$$

$$75 - 34$$

$$15 + 27$$

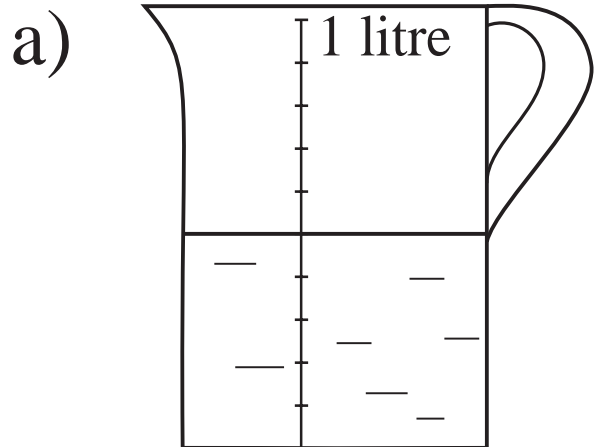
LP 62/2

□	10 cl	7 cl	19 cl	6 cl		4 cl		3 cl	
△	10 cl	13 cl	1 cl		20 cl		11 cl		15 cl

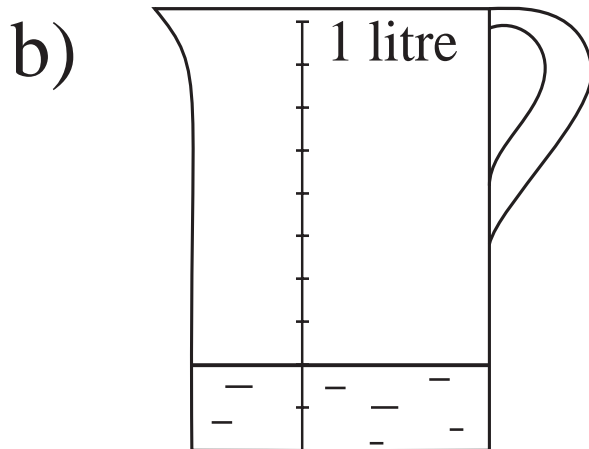
$$\square =$$

$$\triangle =$$

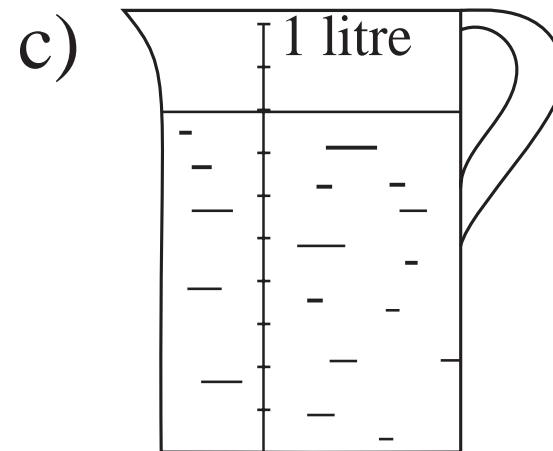
LP 62/6



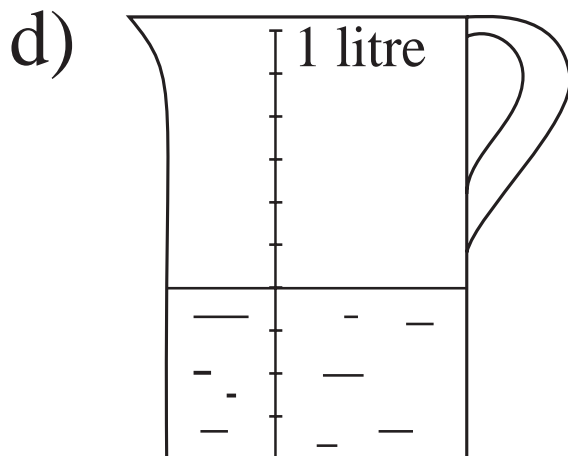
cl



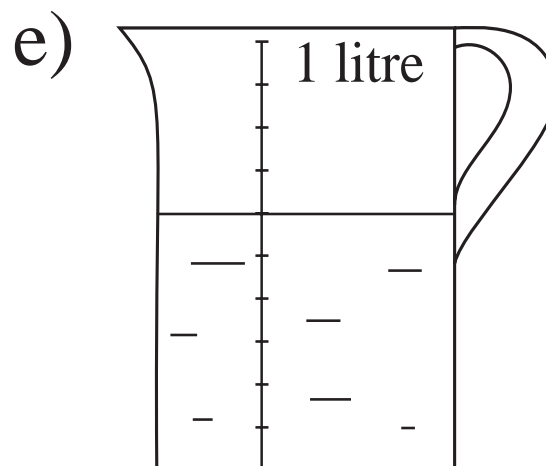
cl



cl



cl



cl

Number of cups	0	3	5				8	10		6
Medicine (cl)				21	12	3			6	27

LP 63/2

a)  $30 \text{ cl} + \square < 39 \text{ cl}$

b)  $79 \text{ m} - \square > 72 \text{ m}$

✓: .....

✓: .....

✗: .....

✗: .....

LP 63/3

- a) 3 litres 60 cl – 1 litre 60 cl  2 litres
- b) 3 litres 50 cl  1 litre 80 cl + 1 litre 70 cl
- c) 2 litres 70 cl – 1 litre 10 cl  3 litres 20 cl
- d) 4 litres 70 cl  2 litres + 20 cl
- e) 1 litre + 40 cl  5 litre 60 cl
- f) 5 litres – 30 cl  4 litres 70 cl

2 litres 40 cl

1 litre 60 cl

3 litres 60 cl

Less than 3 litres

4 litres – 80 cl

2 litres

Not less than 3 litres

3 litres 20 cl

6 litres – 12 cl

4 litres 30 cl

4 litres

5 litres 20 cl – 3 litre 10 cl

1 litre 40 cl + 3 litres 60 cl

3 litres + 100 cl

7 litres – 3 litres

4 litres 60 cl – 1 litre 60 cl

3 litres

4 litres

5 litres

2 litres 10 cl + 90 cl

2 litres + 30 cl

5 litres – 2 litres

6 litres – 100 cl