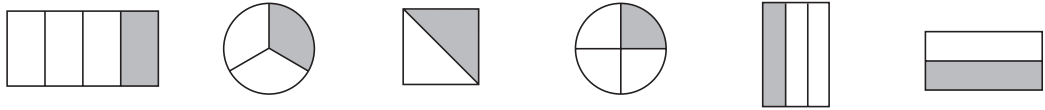
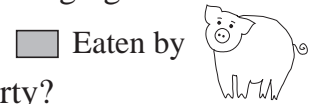


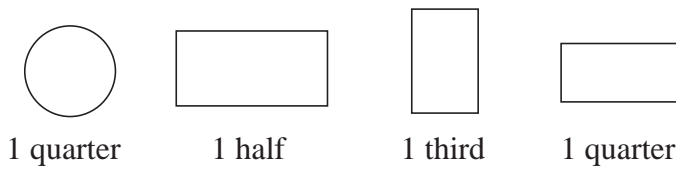
1

Piggy bought different kinds of cakes for a party he was arranging.

- a) *Piggy* wanted to taste each cake right away.
 What part of these cakes did *Piggy* eat before the party?

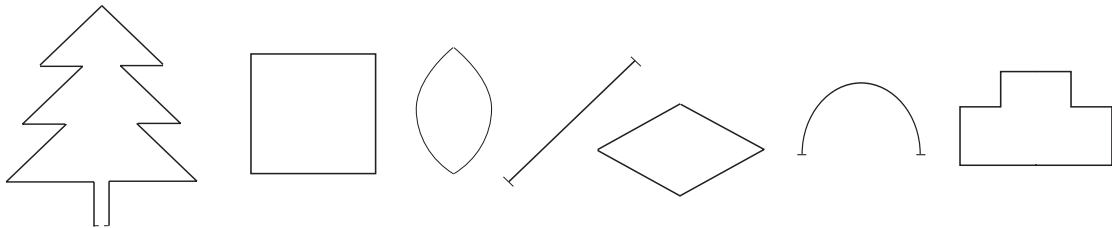


- b) After the party, *Piggy* checked on what had been left.
 Colour the parts of the cakes he found.




2

Colour one half of each shape in *red* and the other half in *blue*.



3

Each drawing is only half of the picture. Complete the whole drawing.



4

- a) Tom had a length of wire which was 110 cm long.
 He used half of it to make a model. What length of wire did he have left?

Answer:

- b) Last month Lucy had £30 in her savings bank. Today, this amount is only half of what she has saved. How much money does Lucy have now?

Answer: